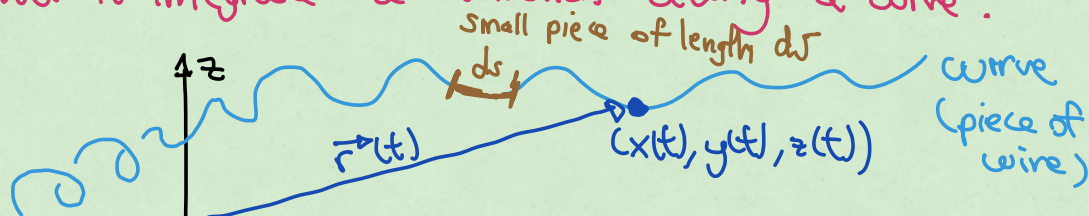


Lecture 22 (16.1-16.2)

Integrals along curves (Line integrals)

How to integrate a function along a curve?



On a curve, x, y, z are functions of "t"

what is total mass if you know the density function of the wire?

units $\frac{\text{mass}}{\text{length}}$ $\leftarrow f = \text{mass density of the wire} = \text{mass per unit length}$

piece of wire size ds , mass of this piece is $= \text{density} \cdot \text{length} = f ds$

$$\text{Total mass} = \int f ds = \int_{t_i}^{t_f} f \left[\frac{ds}{dt} \right] dt$$

$$\frac{ds}{dt} = \begin{array}{l} \text{rate of change of distance} \\ \text{time} \\ \text{= Speed of curve} \end{array} = \int_{t_i}^{t_f} f \underbrace{|\vec{v}|}_{\text{speed}} dt$$

$$\text{speed} = |\vec{v}| = \left| \frac{d\vec{r}}{dt} \right|$$

key Formula #1

If you want to integrate a function f along a curve

① Find equation/parametrization of the curve
 $\vec{r}(t) = (x(t), y(t), z(t))$

② Find velocity $\vec{v} = \frac{d\vec{r}}{dt}$

③ Find speed $|\vec{v}|$.

④ Do the integral

$$\int_{t_i}^{t_f} f |\vec{v}| dt$$

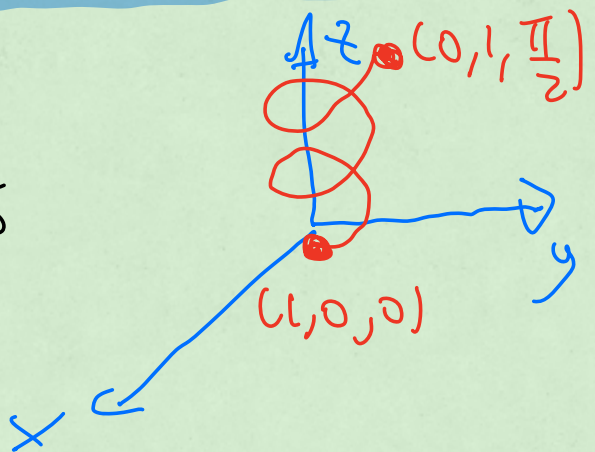
t_i = initial time, t_f = final time,

Remark: that integral is sometimes written as $\int_C f ds$

C stands for curve.

Example:

Find $\int_C f ds$



$$f = xy + 1,$$

C is the part of the helix

$$\vec{r}(t) = (\cos t, \sin t, t)$$

from the point $(1, 0, 0)$

to the point $(0, 1, \pi/2)$

steps

#1 $\vec{r}(t) = (\overbrace{\cos t}^{x(t)}, \overbrace{\sin t}^{y(t)}, \overbrace{t}^{z(t)})$

#2 $\vec{v}(t) = \frac{d\vec{r}}{dt} = (-\sin t, \cos t, 1)$

#3 $|\vec{v}| = \sqrt{(-\sin t)^2 + \cos^2 t + 1^2} = \sqrt{2}$

#4

$$\int f |\vec{v}| dt$$

$$= \int (xy + 1) \sqrt{2} dt$$

$$t = \pi/2 \text{ since } \vec{r}(\pi/2) = (0, 1, \pi/2)$$

$$= \int (\cos t \sin t + 1) \sqrt{2} dt$$

$$t=0 \text{ since } \vec{r}(0) = (1, 0, 0)$$

$$= \int_0^{\pi/2} (1 + \cos t \sin t) \sqrt{2} dt$$

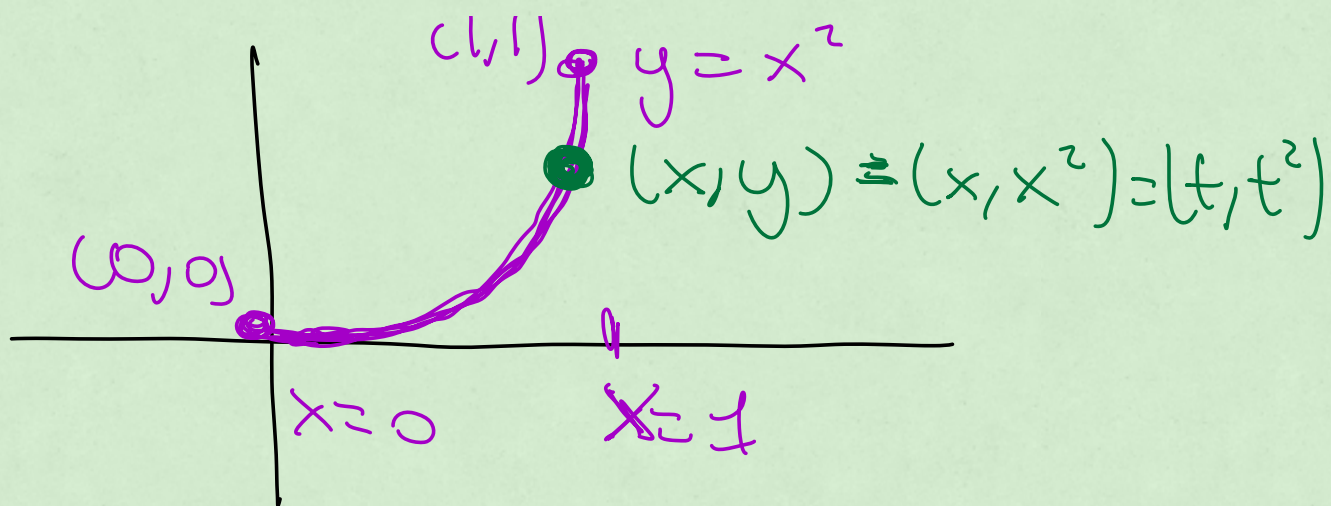
$$= \frac{\sqrt{2}}{2} (\pi + 1)$$

Example 2

Find $\int_C f ds$

$f = x$, C which is the part of the parabola

$y = x^2$ between $x=0$ and $x=1$



#1 find $\vec{r}(t)$

$$\vec{r}(t) = (t, t^2)$$

#2 $\vec{v}(t) = (1, 2t)$

#3 $|\vec{v}| = \sqrt{1 + 4t^2}$

#4 $\int f |\vec{v}| dt$

$$= \int x \sqrt{1 + 4t^2} dt$$

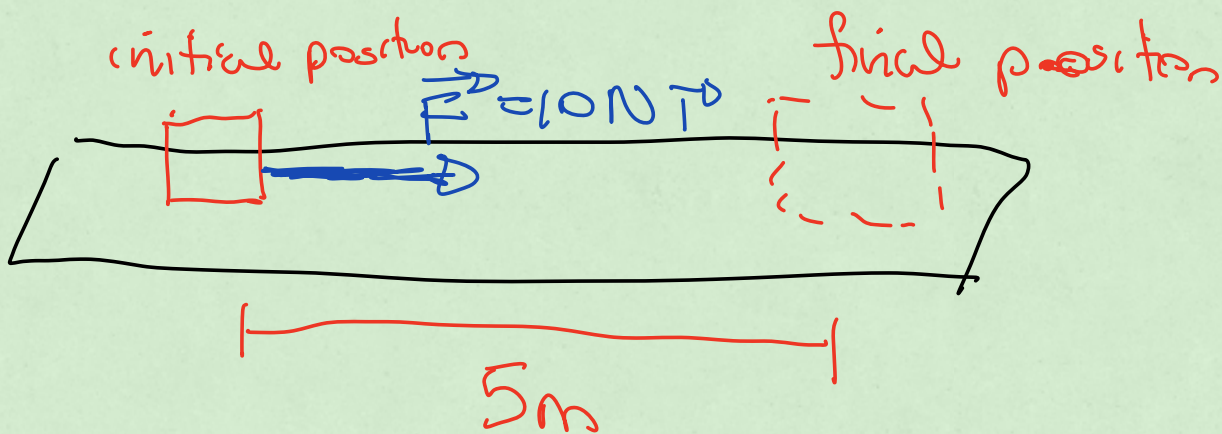
$$= \int_{t=0}^{t=1} t \sqrt{1+4t^2} dt$$

$$= \frac{1}{12} (5\sqrt{5} - 1)$$

The end
of 16.1



Section 16.2

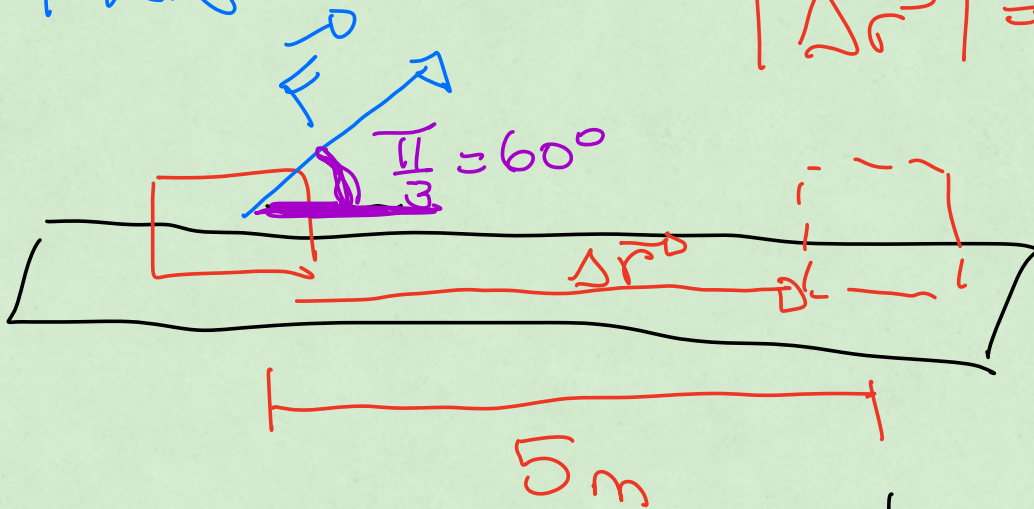


$$\text{Work } W = 10N \cdot 5m = 50J$$

→

$$|\vec{F}| = 10\text{N}$$

$$|\Delta\vec{r}| = 5\text{m}$$

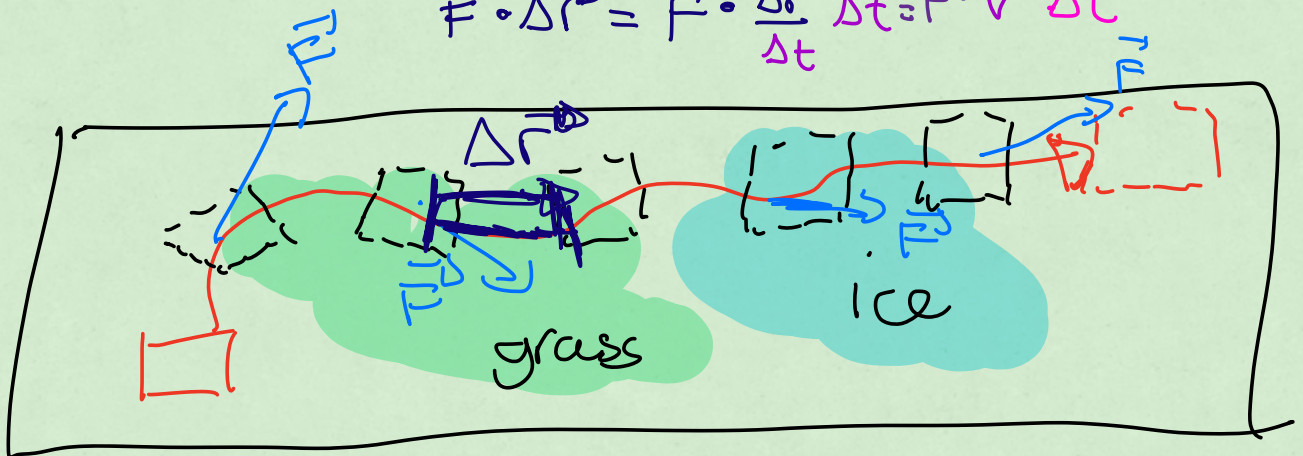


$$\begin{aligned} \text{Work} &= 10\text{N} \cdot 5\text{m} \cdot \cos\left(\frac{\pi}{3}\right) = 25\text{J} \\ &= |\vec{F}| |\Delta\vec{r}| \cos\theta \end{aligned}$$

$$\text{work} = \vec{F} \cdot \Delta\vec{r} \quad (\text{dot product})$$

work for this ^{small} piece

$$\vec{F} \cdot \Delta\vec{r} = \vec{F} \cdot \frac{\Delta\vec{r}}{\Delta t} \Delta t = \vec{F} \cdot \vec{v} \Delta t$$



$$\text{total work} = \int \vec{F} \cdot \vec{v} dt$$

key Formulae #2

To find the integral of a vector \vec{F} along a curve C :

#1 parametrize curve

$$\vec{r}(t) = (x(t), y(t), z(t))$$

#2 find velocity

$$\vec{v} = \frac{d\vec{r}}{dt}$$

#3 (different) do the integral

$$\int_{t_i}^{t_f} \vec{F} \cdot \vec{v} dt$$

Remark: this integral is called work or circulation, and it is written as

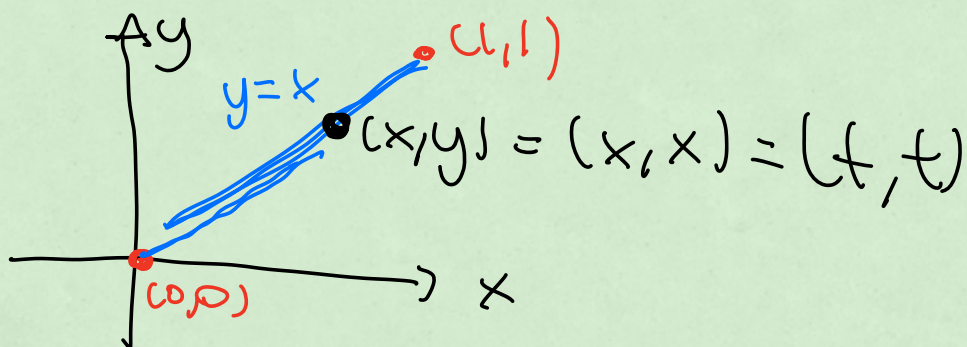
$$\int_C \vec{F} \cdot d\vec{r}$$

Example 1

Find the work done by

$$\vec{F} = xy\vec{i} + 3\vec{j} = (xy, 3)$$

along the curve $y=x$ from $(0,0)$ to $(1,1)$



#1 $\vec{r}(t) = (t, t)$

#2 $\vec{v}(t) = (1, 1)$

#3 $\int \vec{F} \cdot \vec{v} dt$

$$= \int (xy, 3) \cdot (1, 1) dt$$

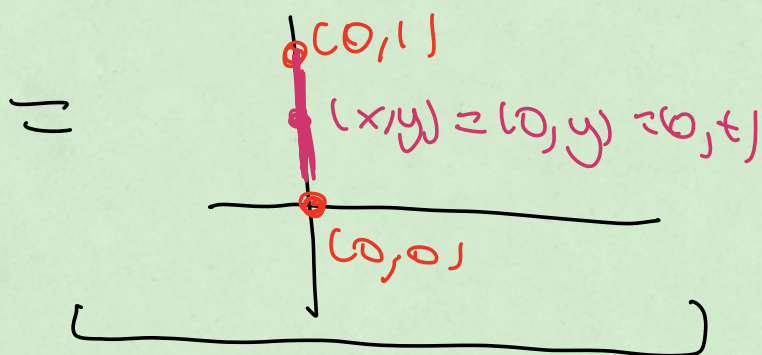
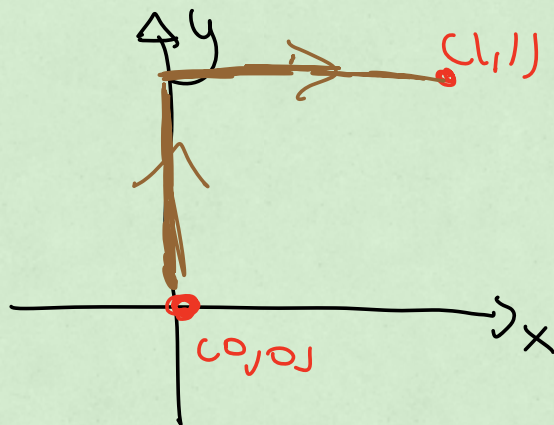
$$= \int (xy + 3) dt$$

$$= \int_{t=0}^{t=1} (t^2 + 3) dt = \boxed{\frac{10}{3}}$$

example 2

$$\vec{F} = (xy, 3)$$

find work along
this new path



$$\vec{r}(t) = (0, t)$$

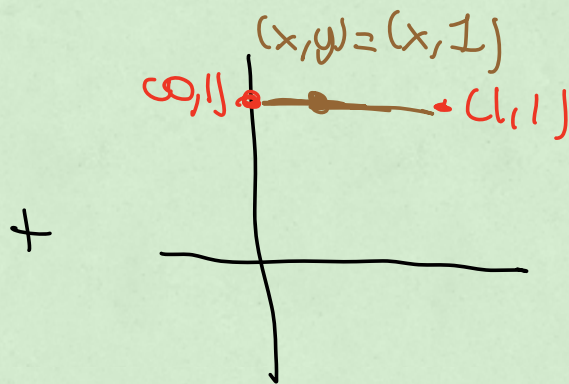
$$\vec{v}(t) = (0, 1)$$

$$\int \vec{F} \cdot \vec{v} dt$$

$$= \int (xy, 3) \cdot (0, 1) dt$$

$$= \int_{t=0}^{t=1} 3 dt$$

$$= 3$$



$$\vec{r}(t) = (t, 1)$$

$$\vec{v}(t) = (1, 0)$$


$$\int \vec{F} \cdot \vec{v} dt$$

$$= \int (xy, 3) \cdot (1, 0) dt$$

$$= \int_{t=0}^{t=1} xy dt$$

$$= \int_{t=0}^{t=1} t dt = \frac{1}{2}$$

$$\text{total work} = 3 + \frac{1}{2} = \frac{5}{2}$$

which is not the same as the
one from before !! 

marcel:

work depends on the trajectory
not just the endpoints.

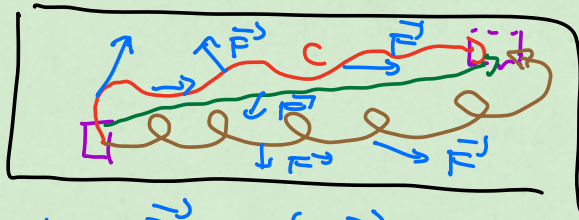
Thursday:

conservative forces

\vec{F} : work only depends
on endpoints not trajectory.

Lecture 23 (16.2-16.3)

Conservative vector fields and potential functions



work done by $\vec{F} = \int_C \vec{F} \cdot d\vec{r} = \int \vec{F} \cdot \vec{v} dt$

\vec{F} is **conservative** if the work done by \vec{F} depends only on the endpoints and not the curve (trajectory) which connects two points.

① How can you verify whether \vec{F} is conservative or not?

\vec{F} will be conservative if $\nabla \times \vec{F}$ (called the curl of \vec{F}) vanishes.

what is the curl of \vec{F} ? ( black box)

$\nabla \times \vec{F} = \text{curl of } \vec{F} = \text{a new vector}$

$$\vec{F} = F_1 \vec{i} + F_2 \vec{j} + F_3 \vec{k} = (F_1, F_2, F_3)$$

$$\nabla \times \vec{F} = \det \begin{pmatrix} \vec{i} & \vec{j} & \vec{k} \\ \frac{\partial}{\partial x} & \frac{\partial}{\partial y} & \frac{\partial}{\partial z} \\ F_1 & F_2 & F_3 \end{pmatrix}$$

Example

$$\vec{F}^0 = (xy^2z, x^2yz, z^2)$$

$$\nabla \times \vec{F}^0 = \det \begin{pmatrix} \vec{i} & \vec{j} & \vec{k} \\ \frac{\partial}{\partial x} & \frac{\partial}{\partial y} & \frac{\partial}{\partial z} \\ xy^2z & x^2yz & z^2 \end{pmatrix}$$

$$= \vec{i} \left(\frac{\partial}{\partial y} z^2 - \frac{\partial}{\partial z} x^2yz \right) - \vec{j} \left(\frac{\partial}{\partial x} z^2 - \frac{\partial}{\partial z} xy^2z \right)$$

$$+ \vec{k} \left(\frac{\partial}{\partial x} x^2yz - \frac{\partial}{\partial y} xy^2z \right)$$

$$= -x^2y \vec{i} + xy^2 \vec{j} + 0 \vec{k}$$

$$\nabla \times \vec{F}^0 = (-x^2y, xy^2, 0)$$

since not every entry of $\nabla \times \vec{F}^0$ is zero,
 \vec{F}^0 is not conservative.

example: $\vec{F}^0 = (-y, x, 0)$

$$\nabla \times \vec{F}^0 = \det \begin{pmatrix} \vec{i} & \vec{j} & \vec{k} \\ \frac{\partial}{\partial x} & \frac{\partial}{\partial y} & \frac{\partial}{\partial z} \\ -y & x & 0 \end{pmatrix}$$

$$\begin{aligned}
 &= \vec{i} \left(\frac{\partial}{\partial y} 0 - \frac{\partial}{\partial z} x \right) - \vec{j} \left(\frac{\partial}{\partial x} 0 + \frac{\partial}{\partial z} y \right) + \vec{k} \left(\frac{\partial}{\partial x} x + \frac{\partial}{\partial y} 0 \right) \\
 &= 0 \vec{i} + 0 \vec{j} + 2 \vec{k} \\
 &= (0, 0, 2)
 \end{aligned}$$

$$\vec{F} = (x, y, 0)$$

$$\nabla \times \vec{F} = \det \begin{pmatrix} \vec{i} & \vec{j} & \vec{k} \\ \frac{\partial}{\partial x} & \frac{\partial}{\partial y} & \frac{\partial}{\partial z} \\ x & y & 0 \end{pmatrix}$$

$$\begin{aligned}
 &= \vec{i} \left(\frac{\partial}{\partial y} 0 - \frac{\partial}{\partial z} y \right) - \vec{j} \left(\frac{\partial}{\partial x} 0 - \frac{\partial}{\partial z} x \right) + \vec{k} \left(\frac{\partial}{\partial x} y - \frac{\partial}{\partial y} x \right) \\
 &= 0 \vec{i} + 0 \vec{j} + 0 \vec{k} \\
 &= (0, 0, 0)
 \end{aligned}$$

\vec{F} is conservative.

$$\nabla \times (-\vec{F}) = -\nabla \times \vec{F} = (0, 0, 0)$$

$$\nabla \times (2\vec{F}) = 2 \nabla \times \vec{F} = (0, 0, 0)$$


Step 2:

If \vec{F} is conservative, then one can find a potential function for \vec{F} .

This is a function f which satisfies

$$\nabla f = \vec{F}$$

example

 $\vec{F} = -mg\vec{j} = (0, -mg, 0)$, m, g constants
 $f = -mgy$, $\nabla f = (0, -mg, 0)$

How to find the potential function f of $\vec{F} = (F_1, F_2, F_3)$

You must solve

$$\begin{cases} \frac{\partial f}{\partial x} = F_1 \\ \frac{\partial f}{\partial y} = F_2 \\ \frac{\partial f}{\partial z} = F_3 \end{cases}$$

example: Find a potential function

for $\vec{F} = (\overbrace{2x \ln y}^{F_1}, \overbrace{\frac{x^2}{y} + z^2}^{F_2}, \overbrace{2yz}^{F_3})$

(Remark: check that $\nabla \times \vec{F} = (0, 0, 0)$ so that \vec{F} is conservative)

Let's find a potential function f :

Must solve the system

$$\begin{cases} (1) & \frac{\partial f}{\partial x} = 2x \ln y \\ (2) & \frac{\partial f}{\partial y} = \frac{x^2}{y} + z^2 \\ (3) & \frac{\partial f}{\partial z} = 2yz \end{cases}$$

Analogy

$$\frac{df}{dx} = x^2 + 1$$

$$f = \frac{x^3}{3} + x + C$$

Partial integral with respect to x :

$$f = \int 2x \ln y \, dx = x^2 \ln y + \underbrace{c(y, z)}_{\text{our constant}}$$

is a function of all the variables we didn't use for the integration

new "f"

$$f = x^2 \ln y + c(y, z)$$

Equation (2) ↓

$$\frac{\partial f}{\partial y} = \frac{x^2}{y} + z^2$$

$$\frac{\partial}{\partial y} (x^2 \ln y + c(y, z)) = \frac{x^2}{y} + z^2$$
$$\frac{x^2}{y} + \frac{\partial}{\partial y} c = \frac{x^2}{y} + z^2$$

$$\frac{\partial c}{\partial y} = z^2$$

$$C(y, z) = \int z^2 dy = yz^2 + b(z)$$

f version 2.0

$$f = x^2 \ln y + yz^2 + b(z)$$

equation (3)

$$\frac{\partial f}{\partial z} = 2yz$$

$$\frac{\partial}{\partial z} (x^2 \ln y + yz^2 + b(z)) = 2yz$$

$$0 + 2yz + \frac{db}{dz} = 2yz$$

$$\frac{db}{dz} = 0$$

$$b(z) = \int 0 dz = 0 + \boxed{a}$$

actual number

not
a function
anymore!

$$f = x^2 \ln y + yz^2 + a$$

↓
arbitrary
constant

$$\nabla f = \left(2x \ln y, \frac{x^2}{y} + z^2, 2yz \right)$$

= entries of \vec{F}
so good ✓

Remark

$$f = -V$$

V is the notation physicist's use

for potential

(3) Knowing potential f ,
makes finding the work
entirely trivial!



work of \vec{F} along this path
(when \vec{F} is conservative)

$$\int_C \vec{F} \cdot d\vec{r} = f(Q) - f(P)$$

work equals difference in potential energy

example:

$$\vec{F} = (2x \ln y, \frac{x^2}{y} + z^2, 2yz)$$



work done by \vec{F}

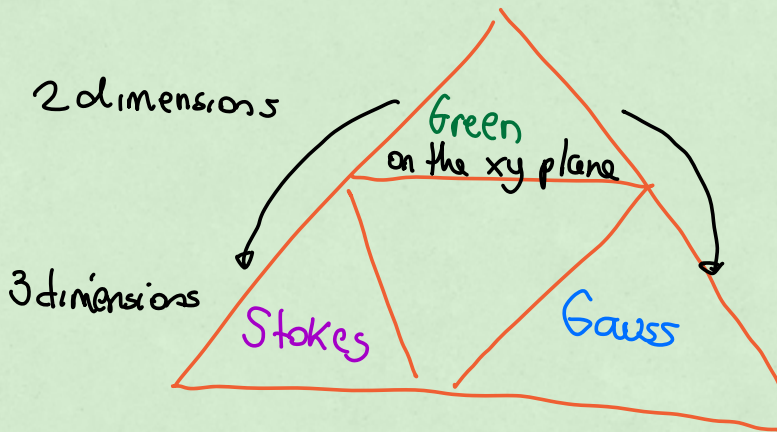
$$f = x^2 \ln y + xz^2 + a$$

$$\begin{aligned} \text{work} &= f(1, 1, 1) - f(0, 1, 0) \\ &= (1 \ln 1 + 1 + a) - (0 + 0 + a) \\ &= 1 + a - a \\ &= \boxed{1} \end{aligned}$$

1

Lecture 24 (16.4: Green's Theorem)
and a bit from 16.2

Calculus Triforce



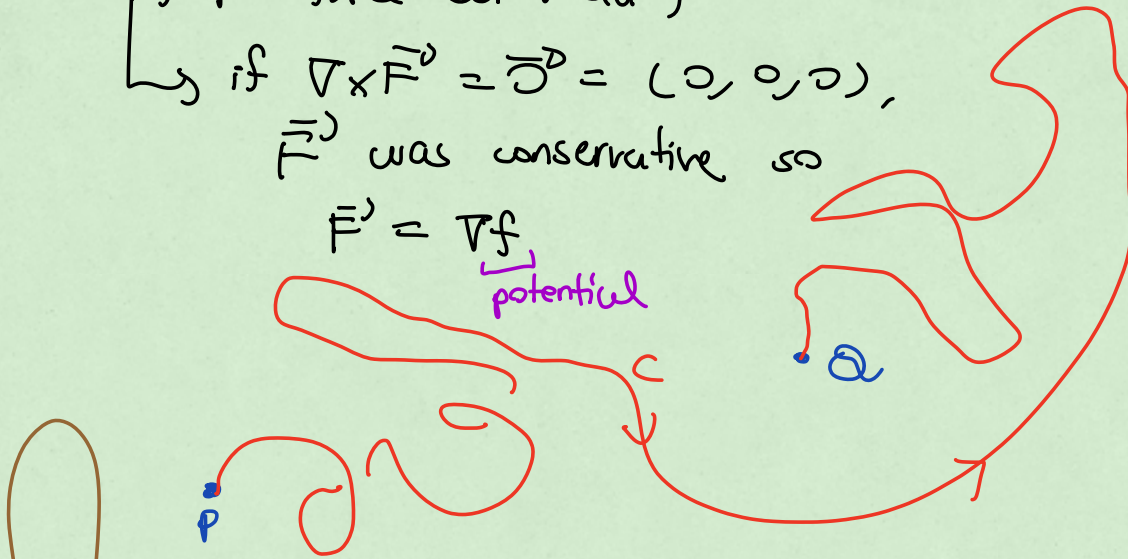
last time

\vec{F} force (or vector)

if $\nabla \times \vec{F} = \vec{0} = (0, 0, 0)$,
 \vec{F} was conservative so

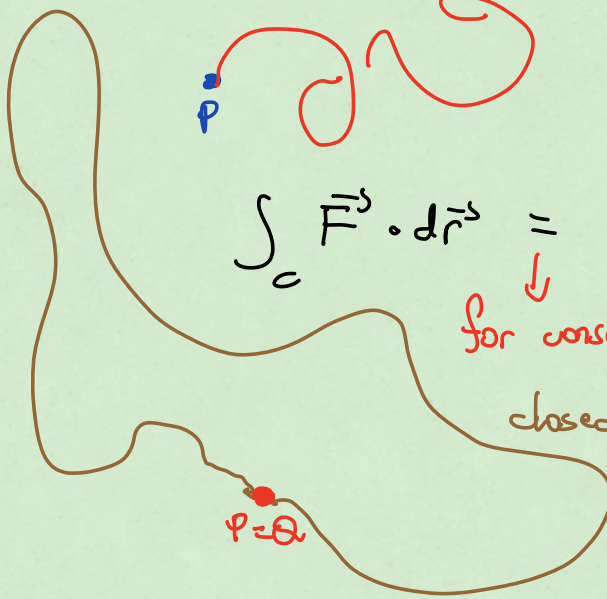
$$\vec{F} = \nabla f$$

potential



$$\int_C \vec{F} \cdot d\vec{r} = f(Q) - f(P)$$

for conservative forces

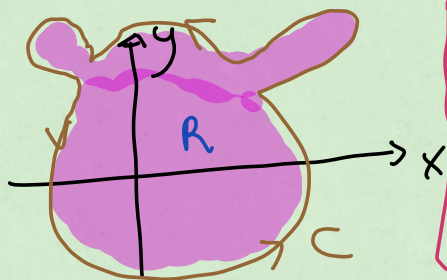


closed loop
(closed path)
(round trip)

work for
a conservative
force is
zero!

Green's Theorem (for regions on the xy plane)

If C is a closed curve on the xy plane and R is the region it encloses then the work done by a force (or vector field \vec{F}^0) along the curve C equals



$$\underbrace{\int_C \vec{F}^0 \cdot d\vec{r}}_{\text{work}} = \overset{\text{Green}}{\iint_R (\nabla_x \vec{F}^0) \cdot \vec{k}^0 dA}$$

Remarks:

- ① Here $\vec{k}^0 = (0, 0, 1)$
- ② The curve is traveled (oriented) in a counterclockwise way for this theorem to hold
- ③ How it appears in the book:
if $\vec{F}^0 = M\vec{i}^0 + N\vec{j}^0 = (M, N, 0)$, so
 $\nabla_x \vec{F}^0 = (0, 0, \frac{\partial N}{\partial x} - \frac{\partial M}{\partial y})$ and so the theorem can be written as

$$\int_C \vec{F}^0 \cdot d\vec{r} = \iint_R \left(\frac{\partial N}{\partial x} - \frac{\partial M}{\partial y} \right) dA$$

how we will use it

Example:

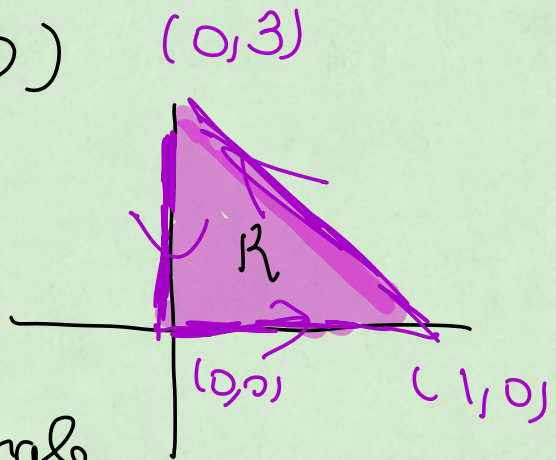
$$\vec{F} = (x^2 + e^y, x + y, 0)$$

$\underbrace{\hspace{2cm}}_M \quad \underbrace{\hspace{2cm}}_N$

Curve

$C =$ sides of the triangle

$R =$ inside of the triangle



work done by \vec{F}

directly: one integral for each side of the triangle and then add them up.

Green

$$\text{work} = \iint_R \left(\frac{\partial N}{\partial x} - \frac{\partial M}{\partial y} \right) dA$$

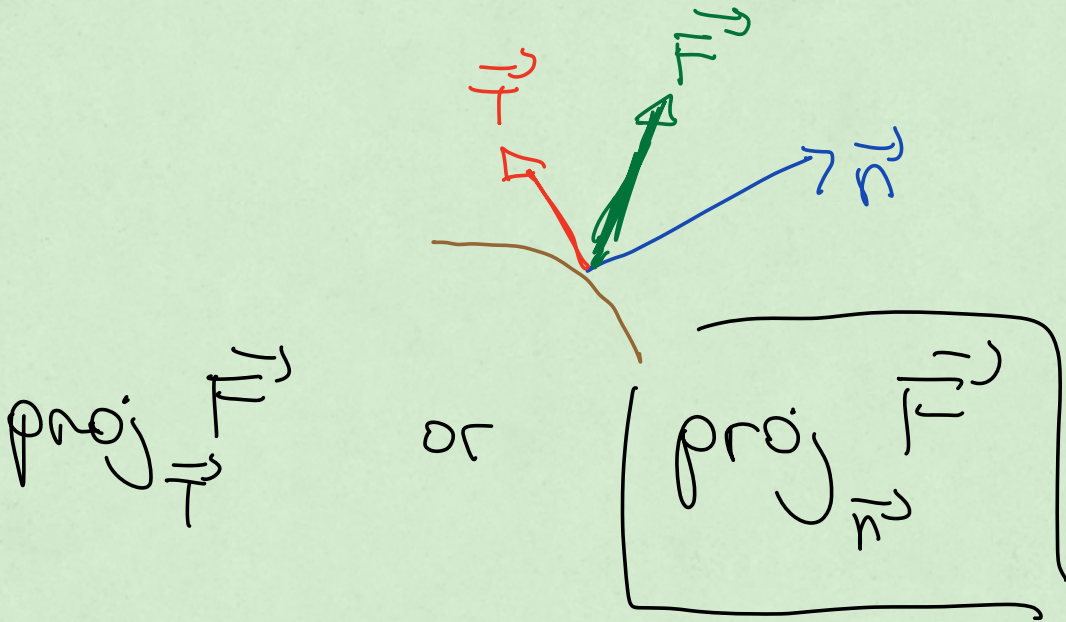
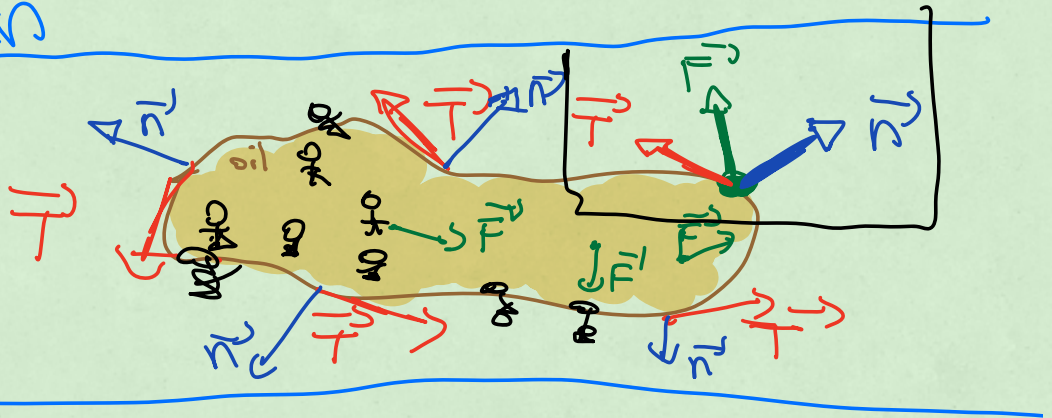
$$\begin{aligned} &= \int_0^1 \int_0^{3-3x} (1 - e^y) dy dx \\ &= \frac{1}{6} (17 - 2e^3) \end{aligned}$$



Flux and second version of Green's Theorem

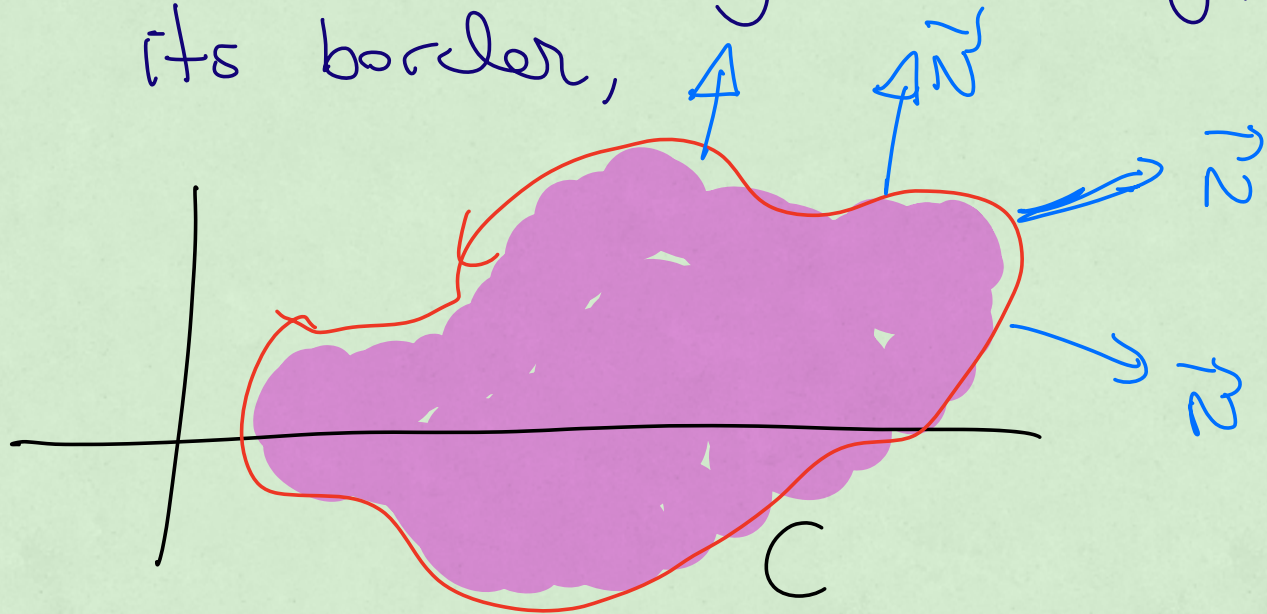
Part 1

\vec{n} = vector perpendicular to the curve



this is the one that helps you exit the region

Flux: how much "stuff" exits
a region on the xy plane through
its border,



curve C with equation
 $\vec{r}(t) = (x(t), y(t))$

\vec{N} = normal vector to the curve

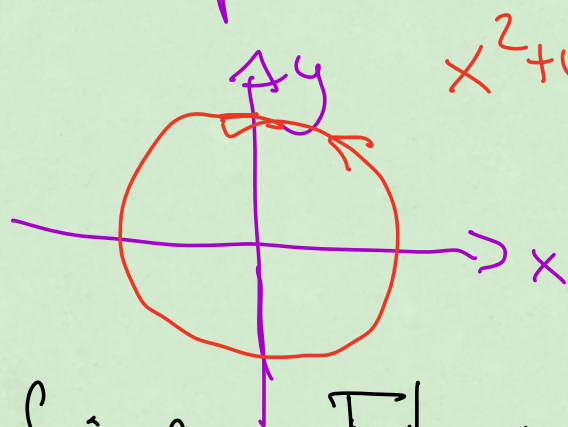
$$\vec{N} = \left(\frac{dy}{dt}, -\frac{dx}{dt} \right)$$

$$\text{Flux of } \vec{F} = \int_C \vec{F} \cdot \vec{N} dt$$

so here we use the dot product

with the normal vector instead
of the velocity vector

example



$$x^2 + y^2 = 4$$

$$\vec{F} = x\vec{i} + y\vec{j}$$

find Flux of \vec{F} :

① Find equation (parametrization
of the curve)

$$\vec{r}^0(t) = (r \cos \theta, r \sin \theta) = (2 \cos \theta, 2 \sin \theta)$$

$$\vec{r}^0(t) = (\underbrace{2 \cos t}_{x(t)}, \underbrace{2 \sin t}_{y(t)})$$

$$\vec{N} = \left(\frac{dy}{dt}, -\frac{dx}{dt} \right) = (2 \cos t, 2 \sin t)$$

Flux

$$= \int \vec{F} \cdot \vec{N} \, dt$$

$$= \int (x, y) \cdot (2\cos t, 2\sin t) \, dt$$


$$= \int_{2\pi} 2x \cos t + 2y \sin t \, dt$$

$$= \int_0^{2\pi} 2(2\cos t)\cos t + 2(2\sin t)\sin t \, dt$$

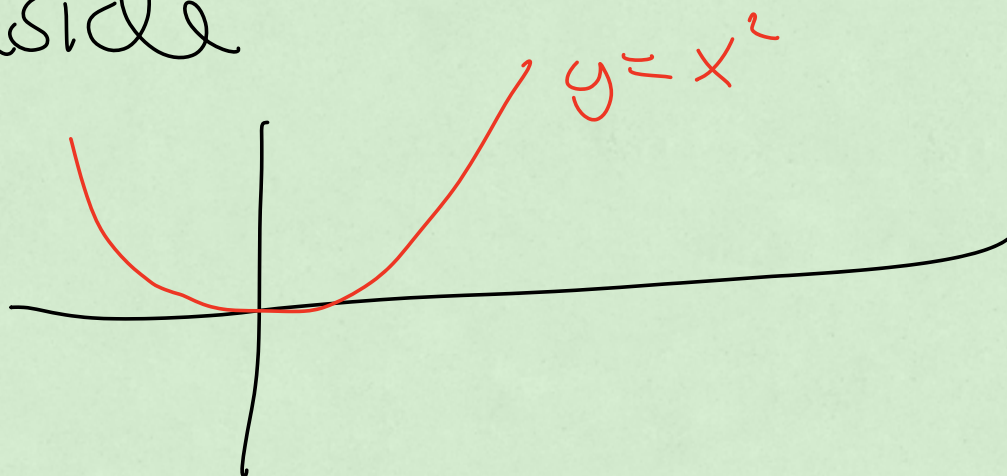
$$= \int_0^{2\pi} 4\cos^2 t + 4\sin^2 t \, dt$$

$$= \int_0^{2\pi} 4 \, dt$$

$$= 8\pi$$



aside



$$\vec{r}^j(t) = (x, y) = (x, x^2)$$

$$\vec{r}^j(t) = \left(\underbrace{t}_{x(t)}, \underbrace{t^2}_{y(t)} \right)$$

$$\vec{v} = \left(\frac{dy}{dt}, -\frac{dx}{dt} \right) = (2t, -1)$$

$$y = x^2$$
$$r \sin \theta = r^2 \cos^2 \theta$$

$$\boxed{\frac{\sin \theta}{\cos^2 \theta} = r}$$

$$\vec{r} = (x, y) = (r \cos \theta, r \sin \theta)$$

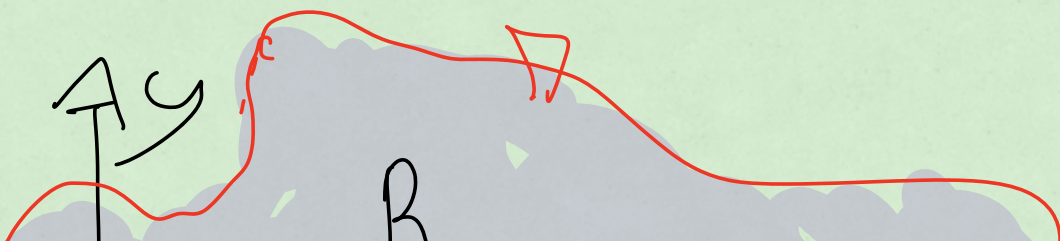
$$\vec{r}^\theta = \left(\frac{r \sin \theta}{\cos^2 \theta}, \frac{r \sin \theta}{\cos^2 \theta} \right)$$

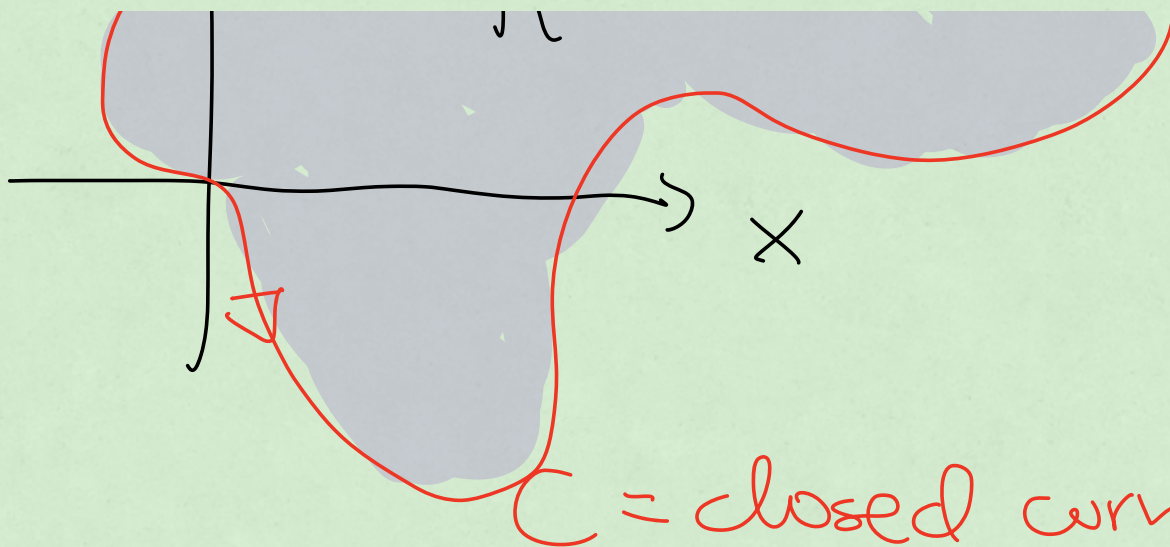
$$\vec{r} = (\tan \theta, \tan^2 \theta)$$

$$\vec{r}(t) = (\tan t, \tan^2 t)$$

alternative
valid

Green's Theorem for Flux
(regions on the xy plane)





$C =$ closed curve

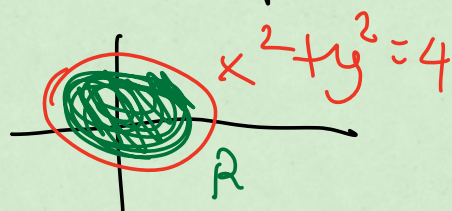
$\vec{F} = (M, N, 0)$ R enclose \mathcal{D} region

$$\text{Flux} = \int_C \vec{F} \cdot \vec{N} \, dt$$

$$\stackrel{\text{Green}}{=} \iint_R \left(\frac{\partial M}{\partial x} + \frac{\partial N}{\partial y} \right) dA$$

Back to the circle example:

$$\vec{F} = \begin{pmatrix} x \\ y \end{pmatrix} \begin{matrix} \downarrow \\ M \end{matrix} \quad \begin{matrix} \downarrow \\ N \end{matrix}$$



Flux of \vec{F}

$$= \text{Green} \iint_R \left(\frac{\partial M}{\partial x} + \frac{\partial N}{\partial y} \right) dA$$

$$= \iint_R (1 + 1) dA$$

$$= \int_0^{2\pi} \int_0^2 2r dr d\theta$$

$$= \int_0^{2\pi} r^2 \Big|_0^2 d\theta$$

$$= \int_0^{2\pi} 4 d\theta$$

$$= 8\pi$$

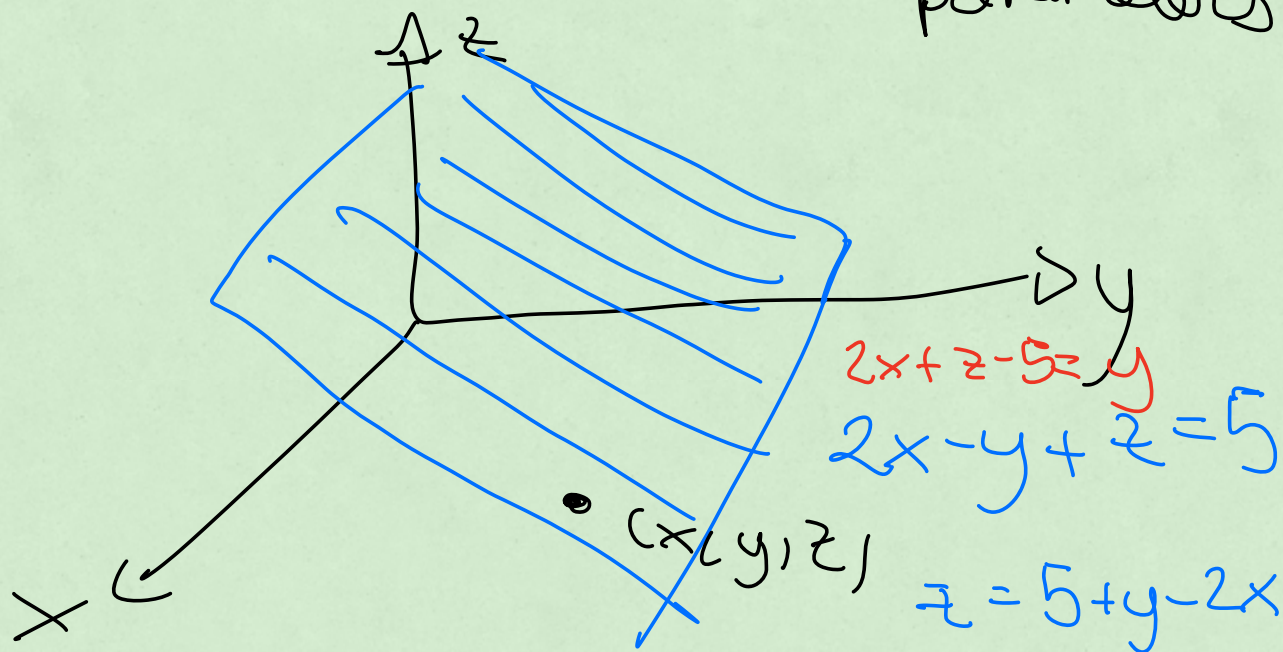


16.5 (Preview)

Parametrize SURFACES

$\vec{r}(t)$: curve uses one parameter t

$\vec{r}(u, v)$: surface : uses two parameters



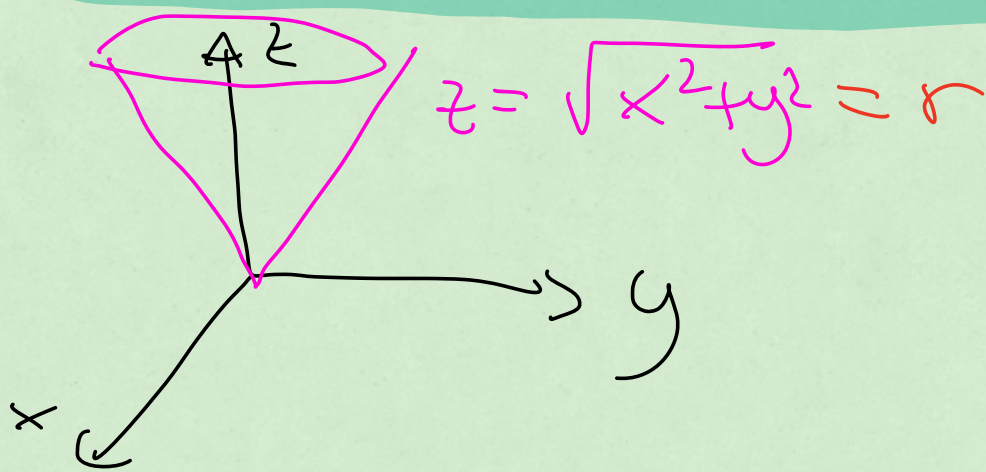
$$(x, y, z) = \underbrace{(x, y, 5 + y - 2x)}$$

$\vec{r}(x, y)$
parametrization plane in terms of x, y

$$(x, y, z) = (x, 2x + z - 5, z)$$

$$\vec{r}(x, z)$$

alternative parametrization
of the SAME plane



$$(x, y, z) = (x, y, \sqrt{x^2 + y^2})$$

$$\vec{r}(x, y)$$

$$(x, y, z) = (r \cos \theta, r \sin \theta, z)$$
$$= (r \cos \theta, r \sin \theta, r)$$

$$\vec{r} = (r, \theta)$$

Lecture 25 (16.5, 16.6)
not on midterm

Parametrizing surfaces

- you write the position of a point on the surface in terms of two variables (parameters)
- to find a parametrization, you use the equation of the surface to find a relation between x, y, z and so you can write one of them in terms of the others

example: cone $z = \sqrt{x^2 + y^2} = r$

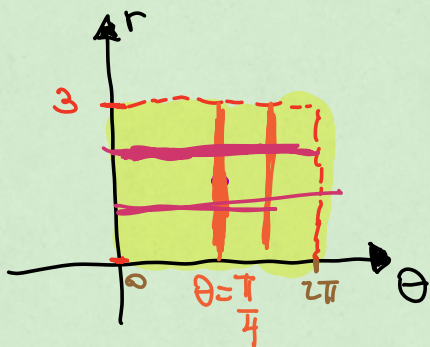
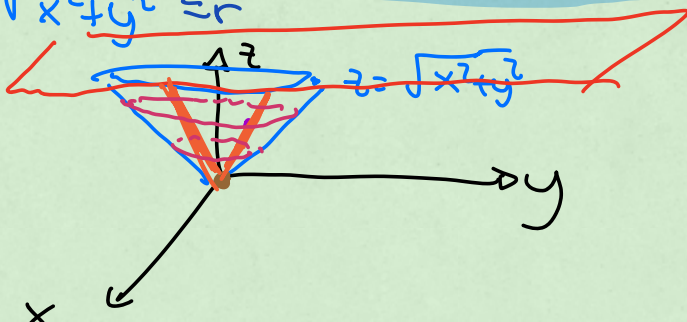
$$\vec{r} = (x, y, z)$$

$$\vec{r}(x, y) = (x, y, \sqrt{x^2 + y^2})$$

$$\vec{r}(r, \theta) = (r \cos \theta, r \sin \theta, r)$$

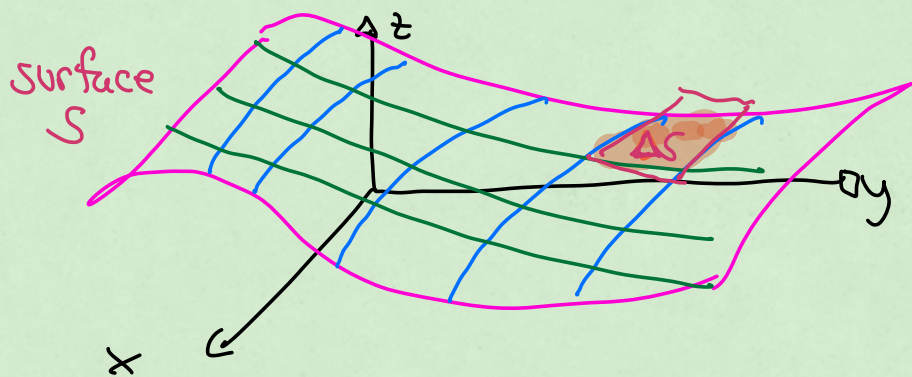
$$0 \leq \theta \leq 2\pi$$

$$0 \leq r \leq 3$$



$$\vec{r}(r, \frac{\pi}{4}) = (\frac{r}{\sqrt{2}}, \frac{r}{\sqrt{2}}, r)$$

last formula for the exam
[surface Jacobian]



$$\Delta S = \text{tiny area of the surface} \\ = \left| \frac{\partial \vec{r}}{\partial u} \times \frac{\partial \vec{r}}{\partial v} \right| dv du$$

$$\text{surface Jacobian} \\ = \left| \frac{\partial \vec{r}}{\partial u} \times \frac{\partial \vec{r}}{\partial v} \right|$$

Last formula for exam

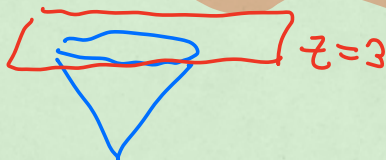
$$\text{area surface } S = \iint_{\substack{u \\ \text{bounds}}} \iint_{\substack{v \\ \text{bounds}}} \left| \frac{\partial \vec{r}}{\partial u} \times \frac{\partial \vec{r}}{\partial v} \right| dv du$$

here $\vec{r}(u, v)$ is the parametrization of the surface

$$\vec{r}(\theta, r) = (r \cos \theta, r \sin \theta, r)$$

$$\frac{\partial \vec{r}}{\partial \theta} = (-r \sin \theta, r \cos \theta, 0)$$

$$\frac{\partial \vec{r}}{\partial r} = (\cos \theta, \sin \theta, 1)$$



$$\underbrace{\frac{\partial \vec{r}}{\partial \theta} \times \frac{\partial \vec{r}}{\partial r}}_{\text{vector perpendicular to the cone}} = \det \begin{pmatrix} \vec{i} & \vec{j} & \vec{k} \\ -r \sin \theta & r \cos \theta & 0 \\ \cos \theta & \sin \theta & 1 \end{pmatrix} = (r \cos \theta, r \sin \theta, -r)$$

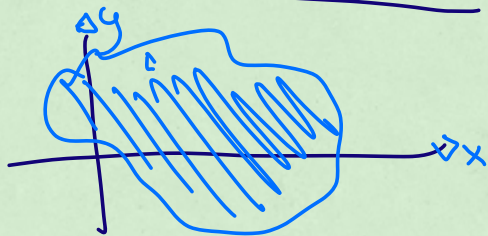
$$\begin{aligned} \text{"Surface" Jacobian} &= \left| \frac{\partial \vec{r}}{\partial \theta} \times \frac{\partial \vec{r}}{\partial r} \right| \\ &= \sqrt{r^2 \cos^2 \theta + r^2 \sin^2 \theta + r^2} \\ &= \sqrt{2r^2} \\ &= \sqrt{2} r \end{aligned}$$

$$\begin{aligned} \text{area cone} &= \int_0^{2\pi} \int_0^3 \sqrt{2} r \, dr \, d\theta \\ &= \boxed{9\sqrt{2} \pi} \end{aligned}$$

$$\vec{r}(r, \theta) = (r \cos \theta, r \sin \theta, 0)$$

$$\frac{\partial \vec{r}}{\partial \theta} = (-r \sin \theta, r \cos \theta, 0)$$

$$\frac{\partial \vec{r}}{\partial r} = (\cos \theta, \sin \theta, 0)$$



$$\frac{\partial \vec{r}}{\partial \theta} \times \frac{\partial \vec{r}}{\partial r} = (0, 0, -r)$$

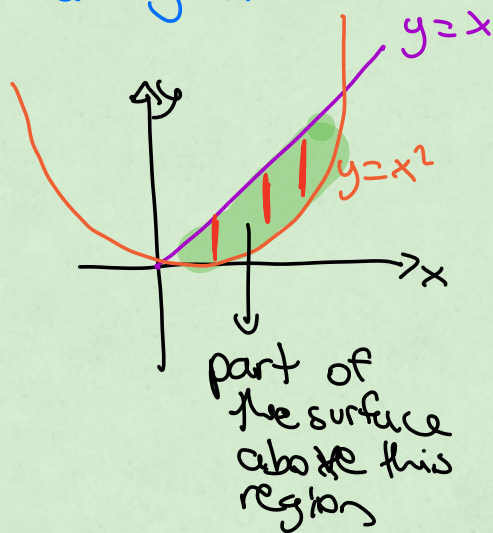
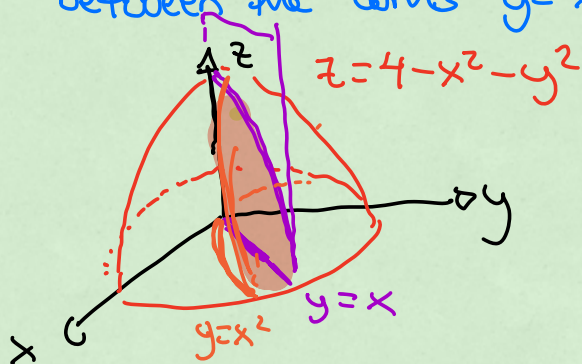
$$\left| \frac{\partial \vec{r}}{\partial \theta} \times \frac{\partial \vec{r}}{\partial r} \right| = \sqrt{0^2 + 0^2 + r^2} = r$$

Find the area of the piece of the surface

$$z = 4 - x^2 - y^2$$

• above the xy plane

• between the curves $y = x$ and $y = x^2$



$$\vec{r}_0(x, y) = (x, y, 4 - x^2 - y^2)$$

$$\frac{\partial \vec{r}_0}{\partial x} = (1, 0, -2x)$$

$$\frac{\partial \vec{r}_0}{\partial y} = (0, 1, -2y)$$

$$\frac{\partial \vec{r}_0}{\partial x} \times \frac{\partial \vec{r}_0}{\partial y} = \det \begin{pmatrix} \vec{i} & \vec{j} & \vec{k} \\ 1 & 0 & -2x \\ 0 & 1 & -2y \end{pmatrix} = (2x, 2y, 1)$$

$$\left| \frac{\partial \vec{r}_0}{\partial x} \times \frac{\partial \vec{r}_0}{\partial y} \right| = \sqrt{1 + 4x^2 + 4y^2}$$

$$\text{area} = \int_0^1 \int_{x^2}^x \sqrt{1 + 4x^2 + 4y^2} \, dy \, dx$$

Steps

- ① Find parametrization $\vec{r}(u, v)$ of surface
- ② Find $\frac{\partial \vec{r}}{\partial u}$, $\frac{\partial \vec{r}}{\partial v}$
- ③ Find $\frac{\partial \vec{r}}{\partial u} \times \frac{\partial \vec{r}}{\partial v}$
- ④ Find $\left| \frac{\partial \vec{r}}{\partial u} \times \frac{\partial \vec{r}}{\partial v} \right|$
- ⑤ area = $\iint_{\substack{u \\ \text{bounds}}} \iint_{\substack{v \\ \text{bounds}}} \left| \frac{\partial \vec{r}}{\partial u} \times \frac{\partial \vec{r}}{\partial v} \right| du dv$

Section 16.6 (for final exam)
want to integrate a function f
over the surface.

$$\underbrace{\iint f dS}_{\text{integral of } f \text{ over}} = \iint_{\substack{u \\ \text{bounds}}} \iint_{\substack{v \\ \text{bounds}}} \underbrace{f \left| \frac{\partial \vec{r}}{\partial u} \times \frac{\partial \vec{r}}{\partial v} \right|}_{\substack{\text{rewrite function in} \\ \text{terms of } u, v}} du dv$$

same as

surface

before

example

$$f = \frac{\text{mass}}{\text{unit area}}$$

$$\rightarrow \iint f \, dS = \text{total mass of the surface}$$

example:

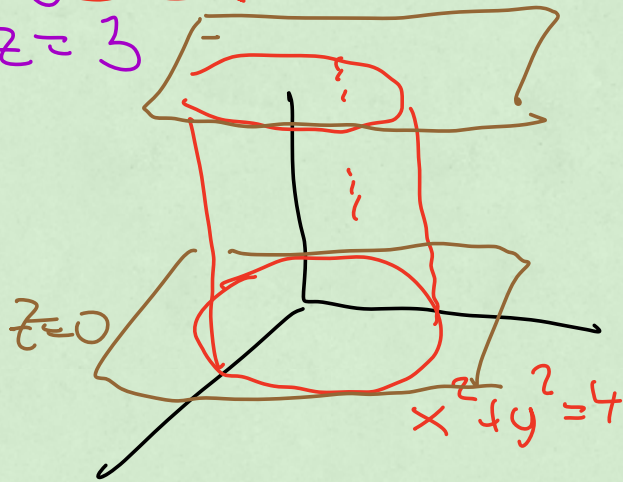
integrate $f(x, y, z) = x + y^2$

over the cylinder

$$x^2 + y^2 = 4$$

$$z = 3$$

between $z=0$ and $z=3$



① Step 1: parametrize cylinder

$$\vec{r} = (x, y, z)$$

$$\vec{r} = (r \cos \theta, r \sin \theta, z)$$

$$\vec{r}(\theta, z) = (2 \cos \theta, 2 \sin \theta, z)$$

$$\begin{aligned} x^2 + y^2 &= 4 \\ r^2 &= 4 \\ \boxed{r=2} \end{aligned}$$

$$\textcircled{2} \quad \frac{\partial \vec{r}}{\partial \theta} = (-2 \sin \theta, 2 \cos \theta, 0)$$

$$\frac{\partial \vec{r}}{\partial z} = (0, 0, 1)$$

$$(3) \frac{\partial \vec{r}}{\partial \theta} \times \frac{\partial \vec{r}}{\partial z} = (2\cos\theta, 2\sin\theta, 0)$$

$$(4) \left| \frac{\partial \vec{r}}{\partial \theta} \times \frac{\partial \vec{r}}{\partial z} \right| = \sqrt{4\cos^2\theta + 4\sin^2\theta} = 2$$

(5) (new step)

$$f = x + y^2$$

$$f = 2\cos\theta + (2\sin\theta)^2$$

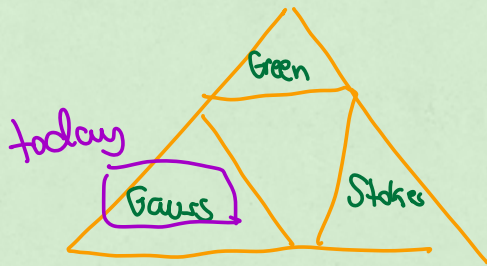
$$f = 2\cos\theta + 4\sin^2\theta$$

$$\iint f \, dS$$

$$= \iint (2\cos\theta + 4\sin^2\theta) \left| \frac{\partial \vec{r}}{\partial \theta} \times \frac{\partial \vec{r}}{\partial z} \right| dz d\theta$$

$$= \int_0^{2\pi} \int_0^3 (2\cos\theta + 4\sin^2\theta) 2 \, dz d\theta$$
$$= 24\pi$$

Lecture 26 (16.6, 16.8)



Flux
 curve C
 $\vec{r}(t) = (x(t), y(t))$
 $\vec{v}(t) = \left(\frac{dx}{dt}, \frac{dy}{dt} \right)$
 $\vec{N} = \left(\frac{dy}{dt}, -\frac{dx}{dt} \right)$

Raritan

Flux = $\int \vec{F} \cdot \vec{N} dt$

\vec{N} = vector normal to the surface

u, v parameters of parametrization of the surface

$$\text{Flux} = \iint \vec{F} \cdot \vec{N} \, d\vec{r} \, du$$

$\vec{N} = \frac{\partial \vec{r}}{\partial u} \times \frac{\partial \vec{r}}{\partial v}$

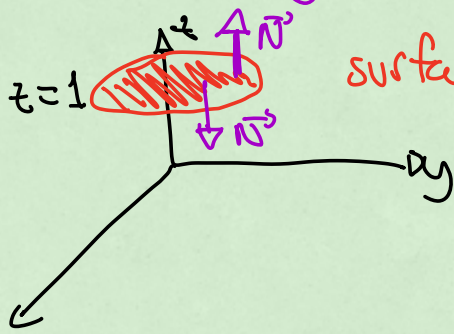
$$\text{Flux} = \iint \vec{F} \cdot \left(\frac{\partial \vec{r}}{\partial u} \times \frac{\partial \vec{r}}{\partial v} \right) \, du \, dv$$

related to how much goes "stuff" passes through a surface

example

$$\vec{F} = (x-y, x+z, z-y)$$

two choices for \vec{N} and you are told which one to use



surface unit disk

$$x^2 + y^2 \leq 1, \text{ but at height } 1,$$

Flux of \vec{F} through \int_S the one with normal vector having third positive entry

First step: parametrize the surface

$$\vec{r}(\theta, r) = (r \cos \theta, r \sin \theta, 1)$$

$$\frac{\partial \vec{r}}{\partial \theta} = (-r \sin \theta, r \cos \theta, 0)$$

$$\frac{\partial \vec{r}}{\partial r} = (\cos \theta, \sin \theta, 0)$$

$$\frac{\partial \vec{r}}{\partial \theta} \times \frac{\partial \vec{r}}{\partial r} = \det \begin{pmatrix} \hat{i} & \hat{j} & \hat{k} \\ -r \sin \theta & r \cos \theta & 0 \\ \cos \theta & \sin \theta & 0 \end{pmatrix}$$

$$= (0, 0, -r \sin^2 \theta - r \cos^2 \theta)$$

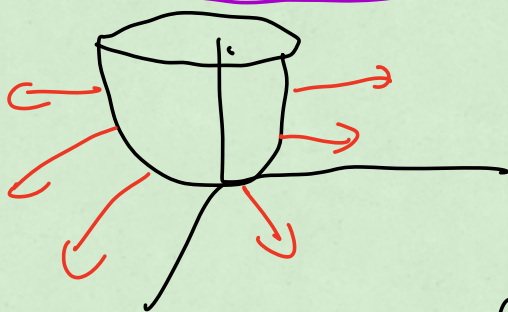
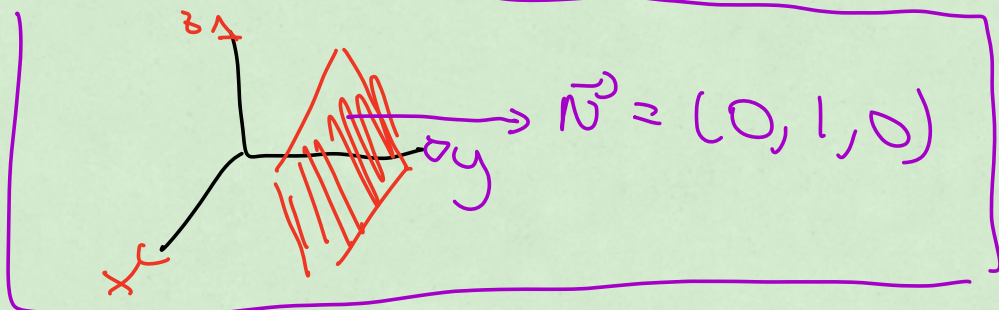
$$= (0, 0, -r)$$

negative third entry

we should have done

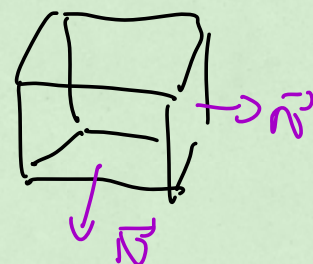
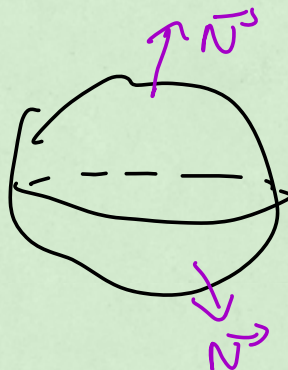
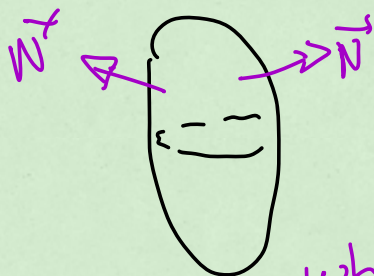
$$\frac{\partial \vec{r}}{\partial r} \times \frac{\partial \vec{r}}{\partial \theta} = - (0, 0, -r) = (0, 0, r)$$

Aside



$$x^2 + y^2 - z = 0$$

$$\nabla f = (2x, 2y, -1)$$



when surface is closed we will choose the normal vector that points away from the surface

$$\vec{r} = (r \cos \theta, r \sin \theta, 1)$$

$$\frac{\partial \vec{r}}{\partial r} \times \frac{\partial \vec{r}}{\partial \theta} = (0, 0, r)$$

$$\vec{r} = (x-y, x+z, z-y)$$

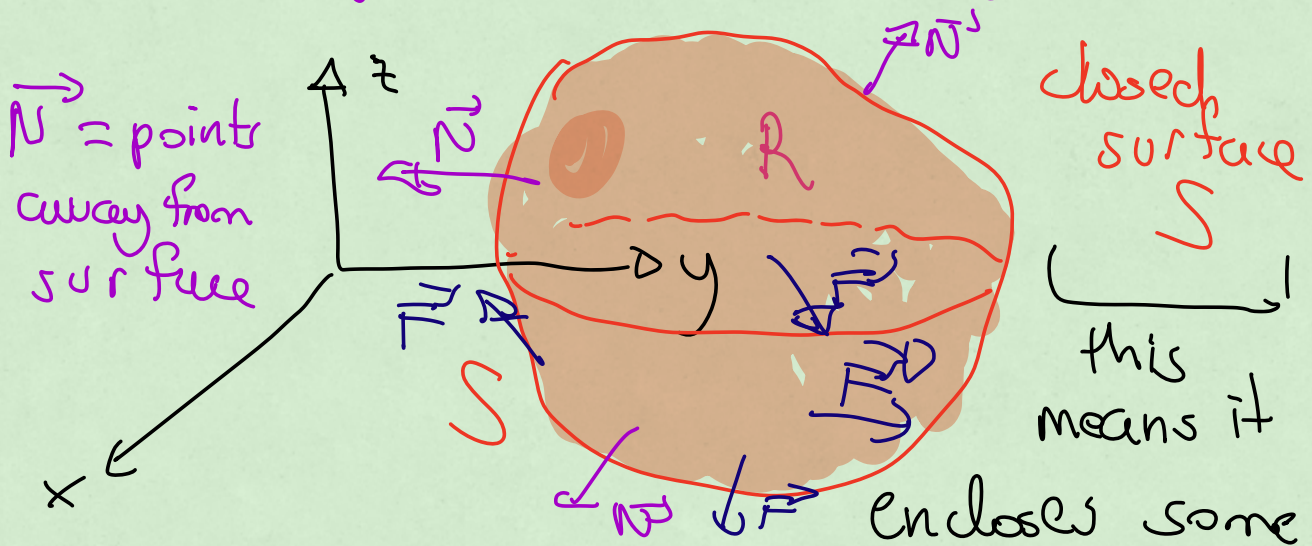
$$\vec{F} = (r \cos \theta - r \sin \theta, r \cos \theta + 1, \boxed{1 - r \sin \theta})$$


$$\begin{aligned} \text{Flux} &= \int_0^{2\pi} \int_0^1 \vec{F} \cdot \underbrace{\left(\frac{\partial \vec{r}}{\partial r} \times \frac{\partial \vec{r}}{\partial \theta} \right)}_{(2\theta, r)} dr d\theta \\ &= \int_0^{2\pi} \int_0^1 \boxed{1 - r \sin \theta} r dr d\theta \\ &= \int_0^{2\pi} \int_0^1 (r - r^2 \sin \theta) dr d\theta \\ &= \pi \end{aligned}$$



Section 16.8

Divergence (or Gauss) Theorem



$\vec{F} = (F_1, F_2, F_3)$ (like a closed box or container)
3D region R
poke ball 

Divergence Theorem

$$\text{Flux of } \vec{F} \\ = \iint \vec{F} \cdot \left(\frac{\partial \vec{r}}{\partial u} \times \frac{\partial \vec{r}}{\partial v} \right) dv du$$

Theorem

$$\iiint_R \left(\frac{\partial F_1}{\partial x} + \frac{\partial F_2}{\partial y} + \frac{\partial F_3}{\partial z} \right) dV$$

called divergence of \vec{F}

$$\begin{aligned} \text{divergence of } \vec{F} &= \nabla \cdot \vec{F} \\ &= \left(\frac{\partial}{\partial x}, \frac{\partial}{\partial y}, \frac{\partial}{\partial z} \right) \cdot (F_1, F_2, F_3) \\ &= \underline{\partial F_1} + \underline{\partial F_2} + \underline{\partial F_3} \end{aligned}$$

$$\frac{\partial}{\partial x} \quad \frac{\partial}{\partial y} \quad \frac{\partial}{\partial z}$$

Example:

$$\vec{F} = (x-y, x+z, z-y)$$

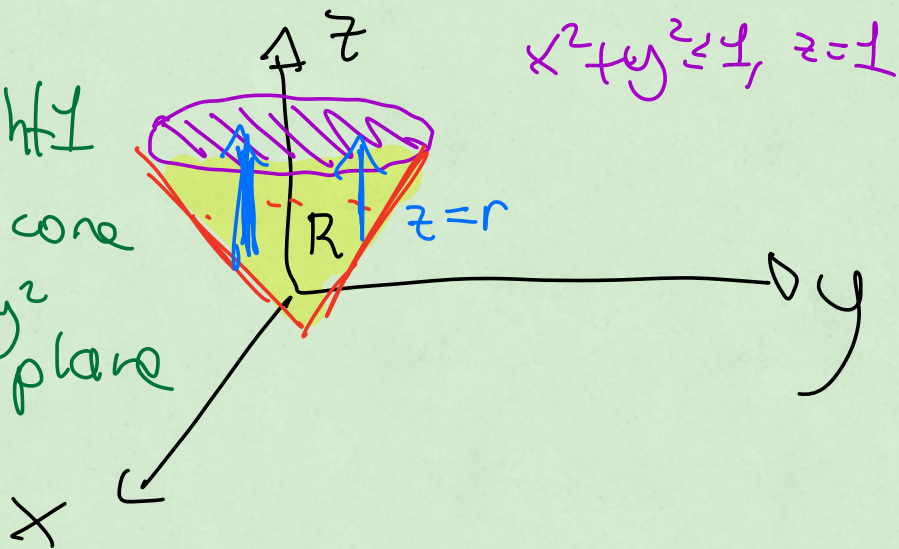
surface =

disk at height 1

+ part of cone

cone $z = \sqrt{x^2 + y^2}$

below $z = 1$ plane



divergence theorem

= Flux (disk + cone)

$$\stackrel{\text{Theorem}}{=} \int \int \int_R \nabla \cdot \vec{F} \, dV$$

$$= \iiint \left(\frac{\partial}{\partial x}, \frac{\partial}{\partial y}, \frac{\partial}{\partial z} \right) \cdot (x-y, x+z, z-y) dV$$

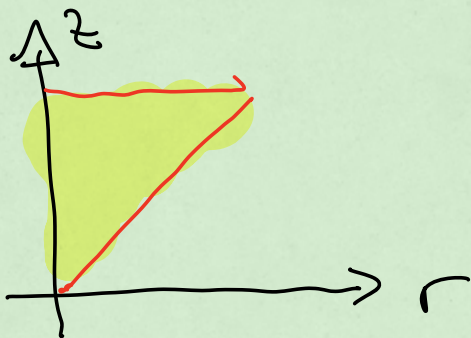
$$= \iiint \frac{\partial}{\partial x}(x-y) + \frac{\partial}{\partial y}(x+z) + \frac{\partial}{\partial z}(z-y) dV$$

$$= \iiint (1 + 0 + 1) dV$$

$$= \int_0^{2\pi} \int_0^1 \int_0^1 2 r dz dr d\theta$$

cylindrical coordinates

$rdzdrd\theta$



$$= \frac{2\pi}{2}$$

Answer

Flux (disk + cone)

Remark

$$\frac{2\pi}{3} = \underbrace{\text{flux of disk}}_{\substack{\text{found it on last} \\ \text{example and it was} \\ \pi}} + \text{flux of the cone}$$

$$\frac{2\pi}{3} = \pi + \text{flux of the cone}$$

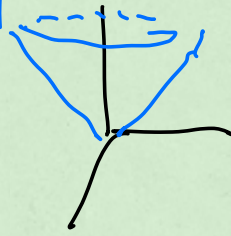
$$\text{flux through cone} = \frac{2\pi}{3} - \pi = -\frac{\pi}{3}$$

if we want to check this you can find flux through cone $z = \sqrt{x^2 + y^2}$ directly.

parametrization of cone

$$\vec{r} = (x, y, \sqrt{x^2 + y^2})$$

$$\vec{r}(\theta, r) = (r \cos \theta, r \sin \theta, r)$$



$$\frac{\partial \vec{r}}{\partial \theta} = (-r \sin \theta, r \cos \theta, 0)$$

$$\frac{\partial \vec{r}}{\partial r} = (\cos \theta, \sin \theta, 1)$$

$$\frac{\partial \vec{r}}{\partial \theta} \times \frac{\partial \vec{r}}{\partial r} = (r \cos \theta, r \sin \theta, -r)$$

Flux through cone

$$= \int_0^{2\pi} \int_0^1 (x-y, x+z, z-y) \cdot (r \cos \theta, r \sin \theta, -r) \, dr \, d\theta$$

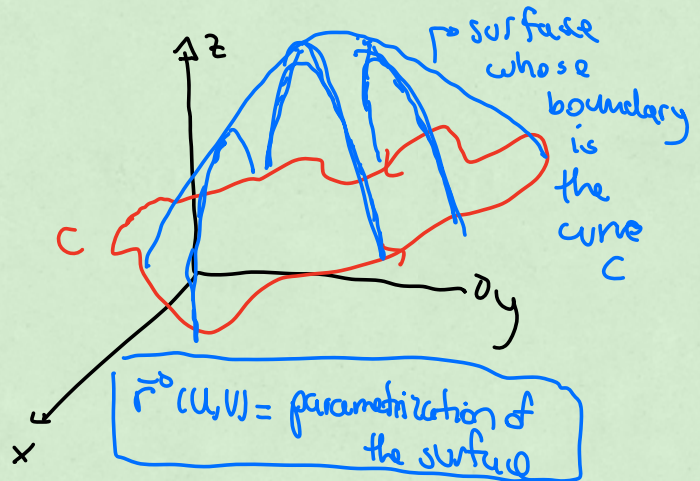
$$= \int_0^{2\pi} \int_0^1 (r \cos \theta - r \sin \theta, r \cos \theta + r, r - r \sin \theta) \cdot (r \cos \theta, r \sin \theta, -r) \, dr \, d\theta$$

check \vec{r}

$$= -\frac{\pi}{3}$$

Lecture 27 (16.7)
Stokes Theorem

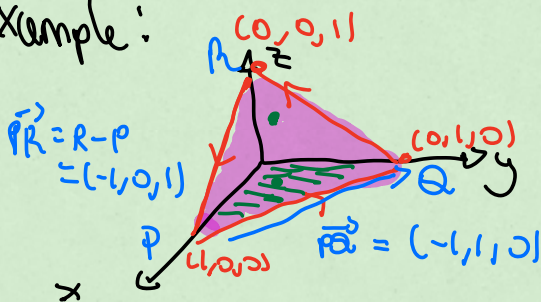
C = closed curve in space
 \vec{F} = some vector field



$$\int_C \vec{F} \cdot d\vec{r} \quad \stackrel{\text{Stokes}}{=} \quad \iint_S (\nabla \times \vec{F}) \cdot \left(\frac{\partial \vec{r}}{\partial u} \times \frac{\partial \vec{r}}{\partial v} \right) du dv$$

work of \vec{F} along curve C flux of the curl of \vec{F}

example:



curve C = 3 segments connecting the points $(0,0,1), (1,0,0), (0,1,0)$

$$\vec{F} = (z^2, y^2, x)$$

Find work of \vec{F} along C using Stokes' theorem

Before Stokes: 3 separate line integrals and add the answers

After Stokes

surface: triangle shown in the picture to parametrize the triangle, you parametrize the plane to which it belongs.

$$\vec{n} = \vec{p} \times \vec{r} = \det \begin{pmatrix} \vec{i} & \vec{j} & \vec{k} \\ 1 & 1 & 1 \\ -1 & -1 & 0 \end{pmatrix} \\ = (1, 1, 1)$$

$$x + y + z = 1 = (1, 1, 1) \cdot (x, y, z)$$

$$z = 1 - x - y$$

$\vec{r}(x, y) = (x, y, 1 - x - y)$ parametrization plane

$$\frac{\partial \vec{r}}{\partial x} = (1, 0, -1)$$

$$\frac{\partial \vec{r}}{\partial y} = (0, 1, -1)$$

$$\frac{\partial \vec{r}}{\partial x} \times \frac{\partial \vec{r}}{\partial y} = (1, 1, 1)$$

$$\text{Stokes: } \int_C \vec{F} \cdot d\vec{r} = \iint_S [\nabla \times \vec{F}] \cdot \left(\frac{\partial \vec{r}}{\partial u} \times \frac{\partial \vec{r}}{\partial v} \right) du dv$$

$$\vec{F} = (z^2, y^2, x)$$

$$\nabla \times \vec{F} = \det \begin{pmatrix} \frac{\partial}{\partial x} & \frac{\partial}{\partial y} & \frac{\partial}{\partial z} \\ z^2 & y^2 & x \\ \frac{\partial}{\partial x} & \frac{\partial}{\partial y} & \frac{\partial}{\partial z} \end{pmatrix} = (0, 2z-1, 0)$$

Stokes

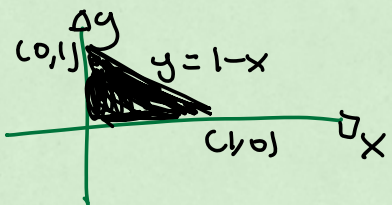
$$= \int_0^1 \int_0^{1-x} (0, 2z-1, 0) \cdot (1, 1, 1) dy dx$$

$$= \int_0^1 \int_0^{1-x} (0, 2(1-x-y)-1, 0) \cdot (1, 1, 1) dy dx$$

$$= \int_0^1 \int_0^{1-x} (2-2x-2y-1) dy dx$$

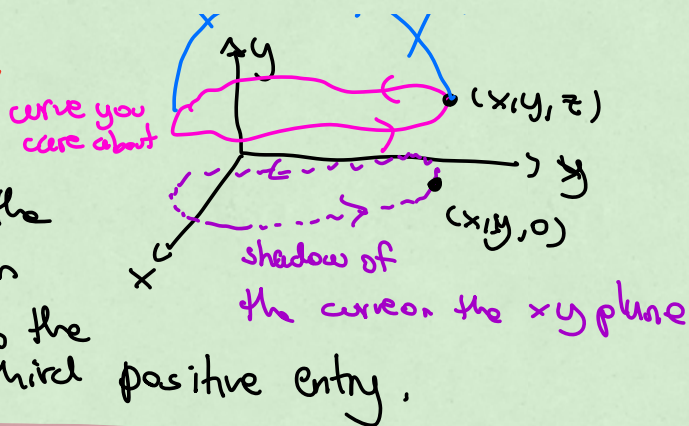
$$= -\frac{1}{6}$$

$$\vec{n}_x \uparrow \vec{n} \uparrow \vec{n}_y \uparrow \vec{n}$$



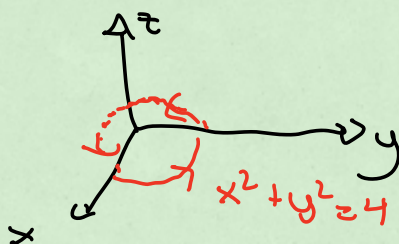
Orientation convention!

if you are moving
counterclockwise on the
(shadow) curve, then
the normal vector to the
surface has third positive entry.



Exhaustive example:

$$\vec{F} = (y, 2z, x^2)$$



Find work of \vec{F} in 3 different ways!
along circle

① Directly as a line integral $\int_C \vec{F} \cdot d\vec{r} = \int \vec{F} \cdot \vec{v} dt$
parametrize circle

$$\vec{r}(t) = (2\cos t, 2\sin t, 0)$$

$$\vec{v}(t) = (-2\sin t, 2\cos t, 0)$$

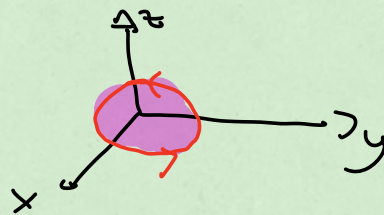
$$\vec{F} = (y, 2z, x^2) = (2\sin t, 0, 4\cos^2 t)$$

$$\int_0^{2\pi} (2\sin t, 0, 4\cos^2 t) \cdot (-2\sin t, 2\cos t, 0) dt$$

$$= \int_0^{2\pi} -4\sin^2 t dt$$

$$= \boxed{-2\pi}$$

(2) Option 2: use Stokes with disk on the xy plane as surface S



parametrize disk:

$$\vec{r}(\theta, r) = (r \cos \theta, r \sin \theta, 0) \quad \begin{array}{l} 0 \leq \theta \leq 2\pi \\ 0 \leq r \leq 2 \end{array}$$

$$\frac{\partial \vec{r}}{\partial \theta} = (-r \sin \theta, r \cos \theta, 0)$$

$$\frac{\partial \vec{r}}{\partial r} = (\cos \theta, \sin \theta, 0)$$

$$\frac{\partial \vec{r}}{\partial \theta} \times \frac{\partial \vec{r}}{\partial r} = \det \begin{pmatrix} \vec{i} & \vec{j} & \vec{k} \\ -r \sin \theta & r \cos \theta & 0 \\ \cos \theta & \sin \theta & 0 \end{pmatrix}$$

$$= (0, 0, -r \sin^2 \theta - r \cos^2 \theta)$$

$$= (0, 0, \boxed{-r})$$

negative third entry

so we have to use

$$\frac{\partial \vec{r}}{\partial r} \times \frac{\partial \vec{r}}{\partial \theta} = (0, 0, r) \text{ instead due to the conventions,}$$

$$\text{Stokes work} = \iint (\nabla \times \vec{F}) \cdot \left(\frac{\partial \vec{r}}{\partial r} \times \frac{\partial \vec{r}}{\partial \theta} \right) dr d\theta$$

$$\vec{F} = (y, 2z, x^2)$$

$$\boxed{\nabla \times \vec{F}} = \det \begin{pmatrix} \vec{i} & \vec{j} & \vec{k} \\ \frac{\partial}{\partial x} & \frac{\partial}{\partial y} & \frac{\partial}{\partial z} \\ y & 2z & x^2 \end{pmatrix} = (-2, -2x, -1)$$

find it first in terms of x, y, z

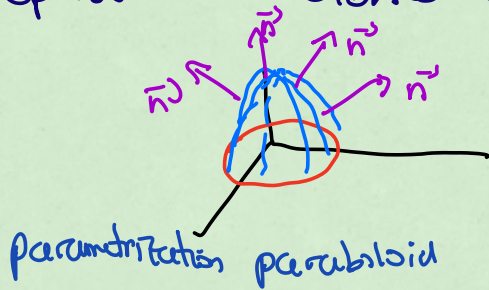
and then rewrite

in terms of parameters

$$= (-2, -2r \cos \theta, -1)$$

$$\begin{aligned}
 &= \int_0^{2\pi} \int_0^2 (-2, -2r\cos\theta, -1) \cdot (0, 0, r) \, dr \, d\theta \\
 &= \int_0^{2\pi} \int_0^2 -r \, dr \, d\theta \\
 &= \boxed{-4\pi}
 \end{aligned}$$

option 3: Stokes with a different surface



surface

$$z = 4 - x^2 - y^2 \quad (\text{paraboloid})$$

$$z = 4 - r^2 \quad z \geq 0$$

$$\begin{aligned}
 \vec{r}(r, \theta) &= (r\cos\theta, r\sin\theta, 4 - r^2) \quad 0 \leq \theta \leq 2\pi \\
 &\quad 0 \leq r \leq 2
 \end{aligned}$$

$$\frac{\partial \vec{r}}{\partial r} = (\cos\theta, \sin\theta, -2r)$$

$$\frac{\partial \vec{r}}{\partial \theta} = (-r\sin\theta, r\cos\theta, 0)$$

$$\frac{\partial \vec{r}}{\partial r} \times \frac{\partial \vec{r}}{\partial \theta} = \det \begin{pmatrix} \vec{i} & \vec{j} & \vec{k} \\ \cos\theta & \sin\theta & -2r \\ -r\sin\theta & r\cos\theta & 0 \end{pmatrix}$$

$$= (2r^2\cos\theta, 2r^2\sin\theta, \boxed{r})$$

$$\begin{aligned}
 \nabla \times \vec{F} &= (-2, -2x, -1) \\
 &= (-2, -2r\cos\theta, -1)
 \end{aligned}$$

important
that it was
with positive
sign

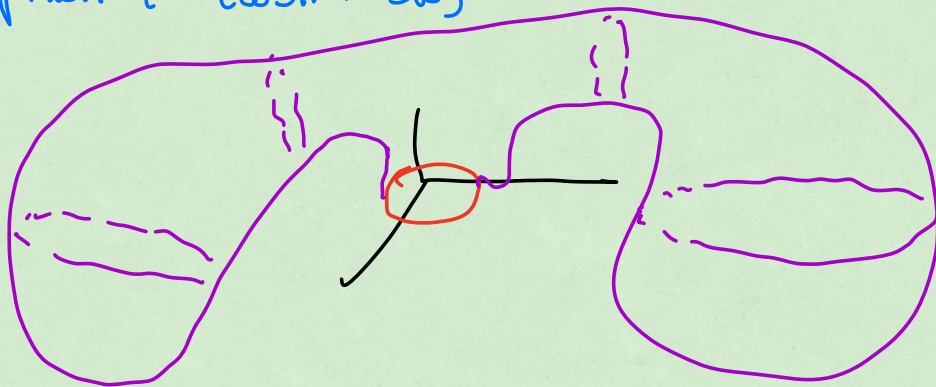
$$\int_0^{2\pi} \int_0^2 (-2, -2r\cos\theta, -1) \cdot (2r^2\cos\theta, 2r^2\sin\theta, r) \, dr \, d\theta$$

$$\begin{aligned}
 &= \int_0^{2\pi} \int_0^2 (-4r^2\cos\theta - 4r^3\cos\theta\sin\theta - r) \, dr \, d\theta \\
 &\quad \text{integrates to 0} \quad \text{integrates to 0}
 \end{aligned}$$

$$= \int_0^{2\pi} \int_0^2 -r \, dr \, d\theta$$

$$= \boxed{-4\pi}$$

option 4 (won't do)



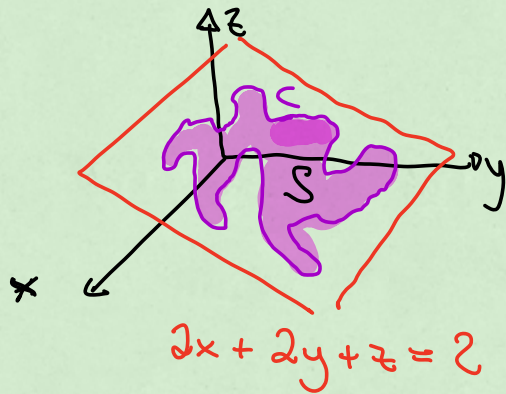
Last Day !!!
Review

Stokes' Theorem:

Use Stokes' theorem
to show that

$$\int_C 2y dx - 3z dy - x dz$$

only depends on the area of the region enclosed
by the curve.



$$\int_C 2y dx - 3z dy - x dz = \int_C \underbrace{(2y, -3z, -x)}_{\vec{F}} \cdot \underbrace{(dx, dy, dz)}_{d\vec{r}}$$

so we are trying to find the work of

$\vec{F} = (2y, -3z, -x)$ along this curve C ,

S = surface for Stokes theorem:
region of the plane whose boundary is
the curve C .

$$= \iint_S (\nabla \times \vec{F}) \cdot \left(\frac{\partial \vec{r}}{\partial u} \times \frac{\partial \vec{r}}{\partial v} \right) du dv$$

curl of \vec{F} :

$$\vec{F} = (2y, -3z, -x)$$

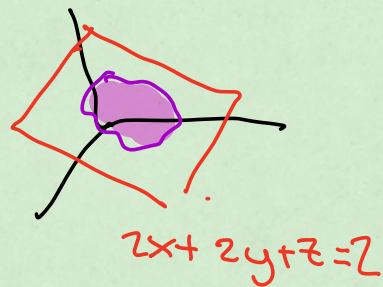
$$\nabla \times \vec{F} = \det \begin{pmatrix} \hat{i} & \hat{j} & \hat{k} \\ \frac{\partial}{\partial x} & \frac{\partial}{\partial y} & \frac{\partial}{\partial z} \\ 2y & -3z & -x \end{pmatrix}$$

$$\begin{pmatrix} \frac{\partial x}{\partial y} & \frac{\partial y}{\partial z} & \frac{\partial z}{\partial x} \\ 2y & 3z & -x \end{pmatrix}$$

$$\nabla \times \vec{F} = (-3, 1, -2)$$

Reminder: curl of \vec{F} is always computed in terms of x, y, z .

Parametrize the surface so need to parametrize the plane



$$\vec{r}(x, y) = (x, y, 2 - 2x - 2y)$$


$$\frac{\partial \vec{r}}{\partial x} = (1, 0, -2)$$

$$\frac{\partial \vec{r}}{\partial y} = (0, 1, -2)$$

$$\frac{\partial \vec{r}}{\partial x} \times \frac{\partial \vec{r}}{\partial y} = (2, 2, 1)$$

Stokes Theorem

$$\begin{aligned} \int_C \vec{F} \cdot d\vec{r} &= \iint (\nabla \times \vec{F}) \cdot \left(\frac{\partial \vec{r}}{\partial x} \times \frac{\partial \vec{r}}{\partial y} \right) dy dx \\ &= \iint (-3, 1, -2) \cdot (2, 2, 1) dy dx \end{aligned}$$



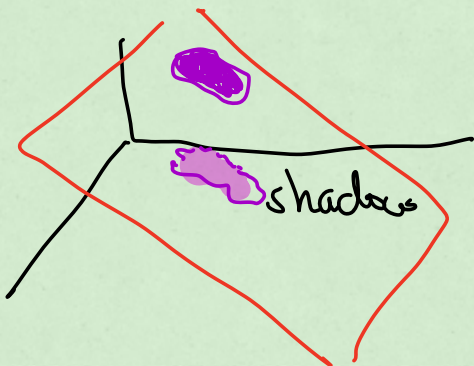
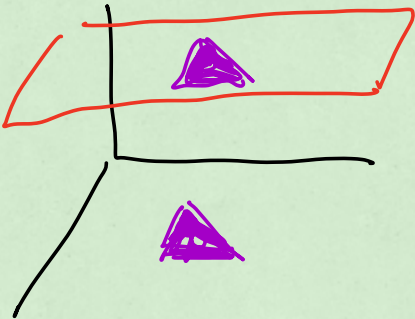
$$= \iint -6 \, dy \, dx$$

$$= -6 \iint 1 \, dy \, dx$$

Bounds
for x, y

$$= -6 \text{ area (Shadow on } xy \text{ plane)}$$

$$\text{work} = -6 \text{ area (shadow)}$$



Remark

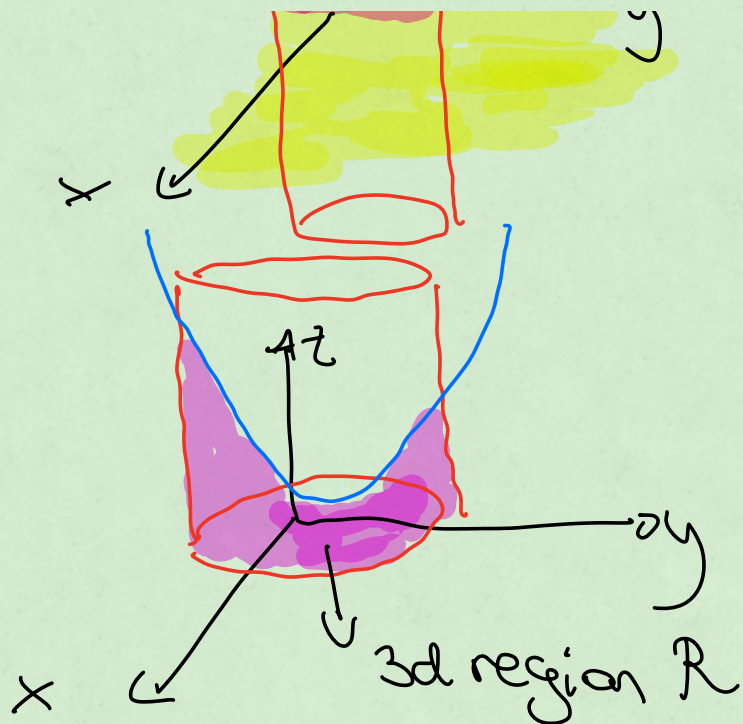
$$\text{area shadow} = \left| \frac{1}{6} \text{ work} \right|$$



Another example:

- 3d region =
- stuff inside cylinder $x^2 + y^2 = 4$
 - below paraboloid $z = x^2 + y^2$
 - above the xy plane





xy plane = floor
 $z = x^2 + y^2$ roof
 cylinder = lateral walls

Boundary of $R =$ surface S
 consisting of

- disk on the xy plane plus
- parts of the cylinder plus
- part of the paraboloid.

$$\vec{F} = (2y, 9xy, -4z)$$

use divergence theorem to find
 the outward flux of \vec{F} through
 surface S .

Flux of \vec{F} =
divergence
theorem

$$\iiint_R \nabla \cdot \vec{F} \, dV$$

$$\nabla \cdot \vec{F} = \frac{\partial}{\partial x} (2y) + \frac{\partial}{\partial y} (9xy) + \frac{\partial}{\partial z} (-4z)$$

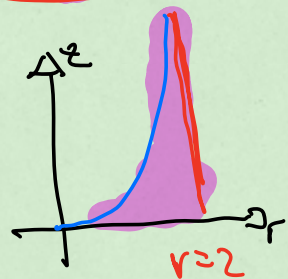
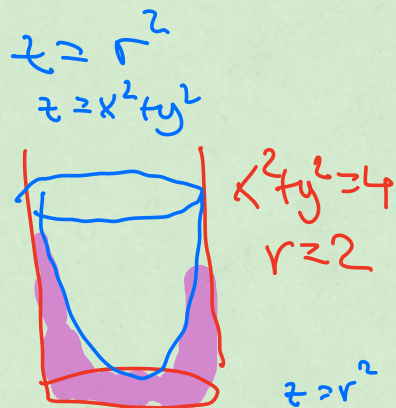
$$= 0 + 9x - 4$$

$$\nabla \cdot \vec{F} = 9x - 4$$

$$\iiint (9x - 4) \, dV$$

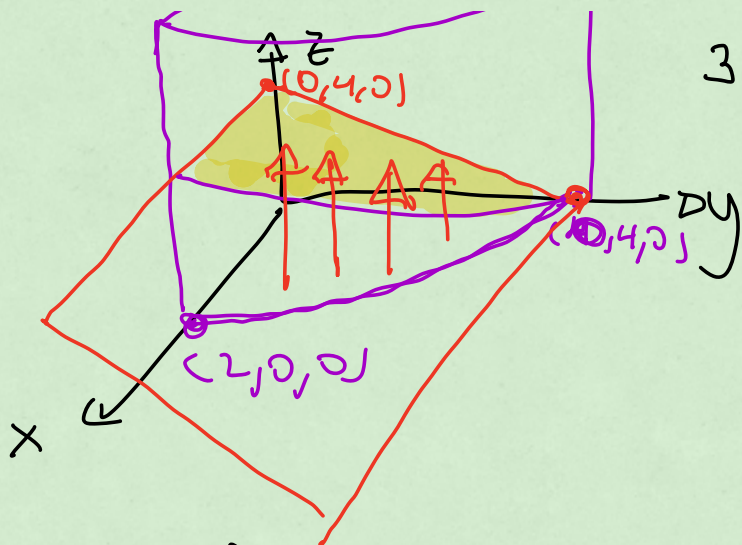
$$\int_0^{2\pi} \int_0^2 \int_0^{r^2} (9r \cos \theta - 4) \, r \, dz \, dr \, d\theta$$

$$= \boxed{-32\pi}$$



Another example





3d Region:

- inside first octant
($x, y, z > 0$)

- inside the elliptical cylinder

$$4x^2 + y^2 = 16$$

- below plane

$$y + z = 4$$

$$z = 4 - y$$

surface

$S =$ boundary of this region

$$\vec{F} = (4xz, -3xy, -2z^2)$$

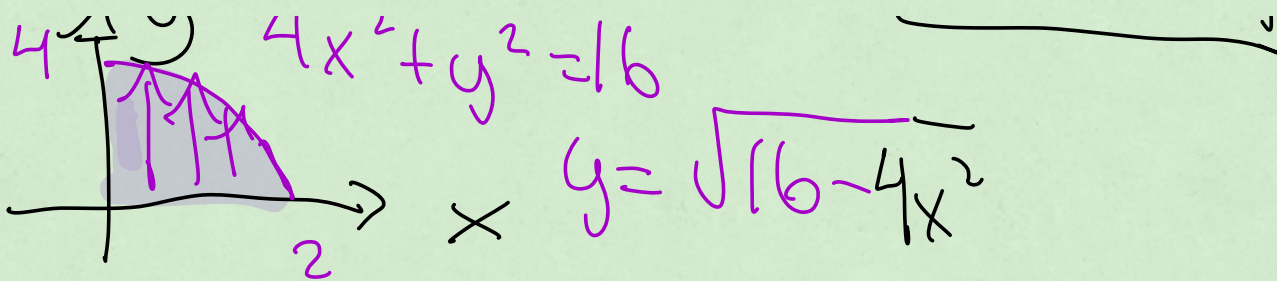
we divergence theorem to find the flux of \vec{F} through S

$$\nabla \cdot \vec{F} = 4z - 3x - 4z = -3x$$

$$\text{Flux} = \iiint \nabla \cdot \vec{F} \, dV = \int_0^2 \int_0^{4-y} \int_0^{4-y} -3x \, dz \, dy \, dx$$

$$= -40$$

1 (1 " ?



\vec{F} units \cup

$\nabla \cdot \vec{F}$ units $\frac{\cup}{\text{length}}$

$\iiint \nabla \cdot \vec{F} dV$ has units

$\frac{\cup}{\text{length}}$ - volume

$= \cup \cdot \text{area}$

units of flux
 or this integral $=$ units of \vec{F}
 \cdot units of
 area